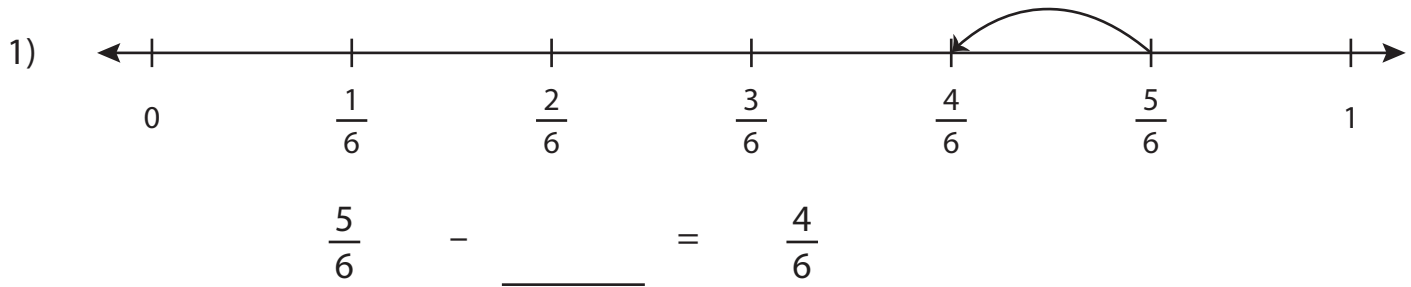


# Subtracting Fractions on a Number Line

Complete the subtraction sentence that describes each model.



2)

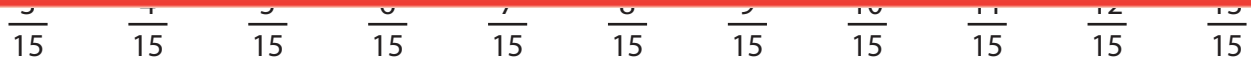
# Preview

Become a member to unlock  
unrestricted access to both printable  
and online worksheets.



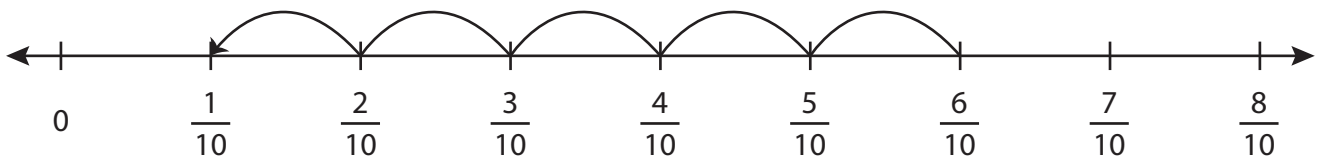
[www.tutoringhour.com](http://www.tutoringhour.com)

3)



$\underline{\hspace{2cm}} - \frac{8}{15} = \frac{3}{15}$

4)



$\frac{6}{10} - \underline{\hspace{2cm}} = \frac{1}{10}$