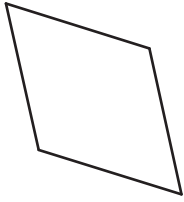


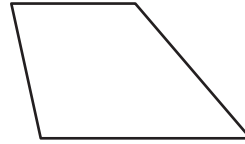
Naming Quadrilaterals

Identify and name each quadrilateral.

1)



2)



3)

Preview

Become a member to unlock
unrestricted access to both printable
and online worksheets.

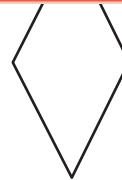


5)

7)

www.tutoringhour.com





9)



10)

