



## 3-Digit plus 2-Digit Addition




Circle the two numbers whose sum is 885.

50      18      835      29



Circle the two numbers whose sum is 1,082.

989      176      93      628



3  
Cir

# Preview

Become a member to unlock  
unrestricted access to both printable  
and online worksheets.

www.tutoringhour.com




5  
Cir



7  
Cir


995      71      97      873

103      63      202      99



Circle the two numbers whose sum is 765.

56      60      709      15



Circle the two numbers whose sum is 223.

96      179      127      214