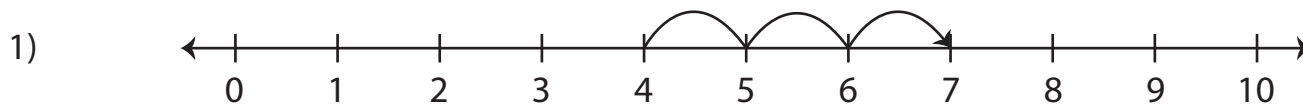


Number Line Addition | 0 - 10

Read each number line and solve the problem.



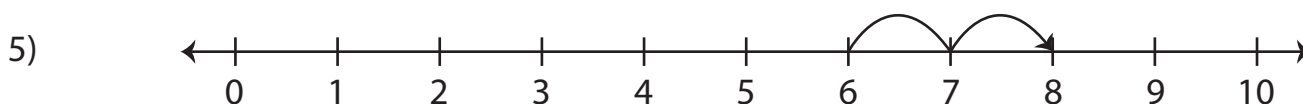
$$4 + 3 = \underline{\hspace{2cm}}$$



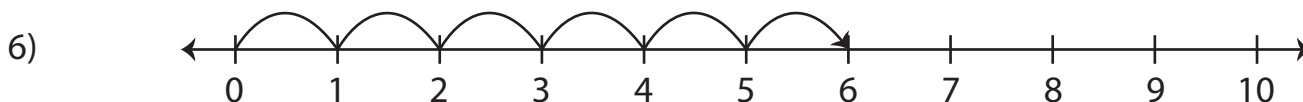
Preview

3) **Become a member to unlock
unrestricted access to both printable
and online worksheets.**

4) 
www.tutoringhour.com



$$6 + 2 = \underline{\hspace{2cm}}$$



$$0 + 6 = \underline{\hspace{2cm}}$$