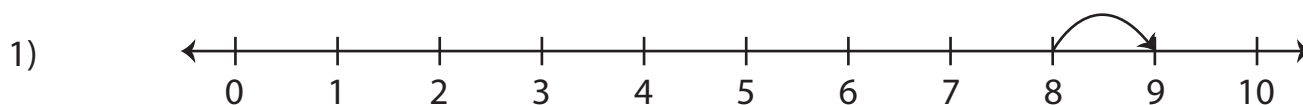


Number Line Addition | 0 - 10

Complete the addition sentence that describes each model.



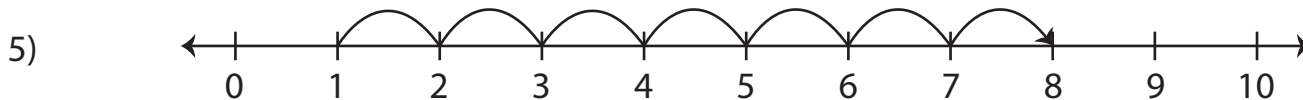
$$\underline{\quad} + 1 = 9$$



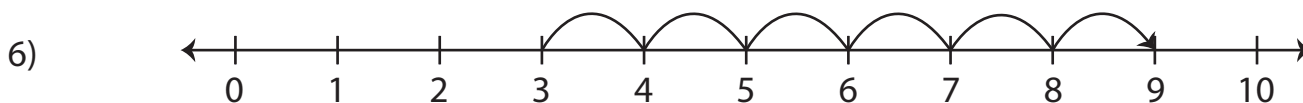
Preview

3) **Become a member to unlock
unrestricted access to both printable
and online worksheets.**

4)  www.tutoringhour.com



$$1 + \underline{\quad} = 8$$



$$\underline{\quad} + 6 = 9$$