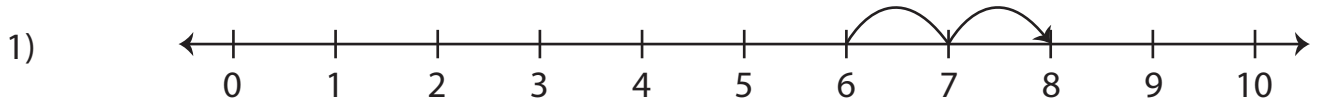
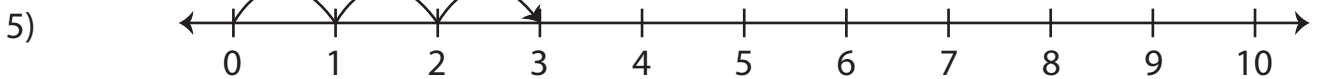
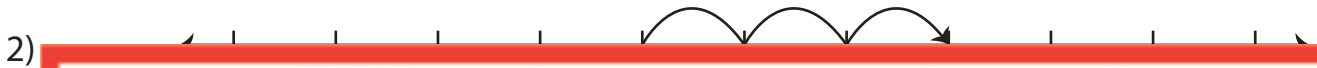


Number Line Addition | 0 - 10

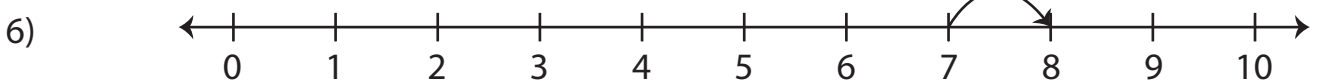
Complete the addition sentence that describes each model.



$$6 + \underline{\quad} = 8$$



$$\underline{\quad} + 3 = 3$$



$$\underline{\quad} + 1 = 8$$

Preview

Become a member to unlock
unrestricted access to both printable
and online worksheets.

www.tutoringhour.com

