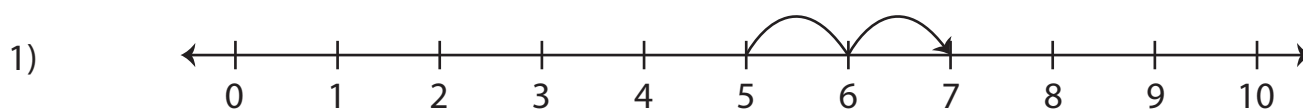


Number Line Addition | 0 - 10

Write the addition sentence that describes each model.



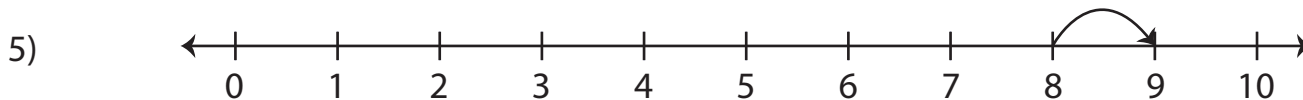
$$\underline{\quad} + \underline{\quad} = \underline{\quad}$$



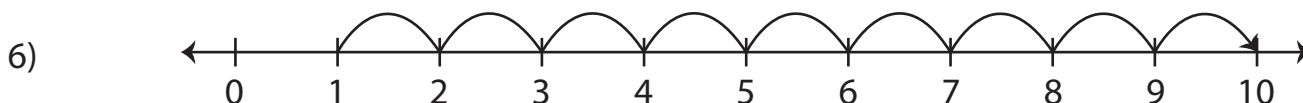
3) **Preview**

4) **Become a member to unlock
unrestricted access to both printable
and online worksheets.**

www.tutoringhour.com



$$\underline{\quad} + \underline{\quad} = \underline{\quad}$$



$$\underline{\quad} + \underline{\quad} = \underline{\quad}$$