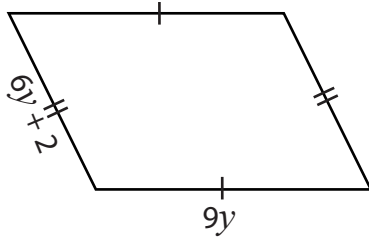


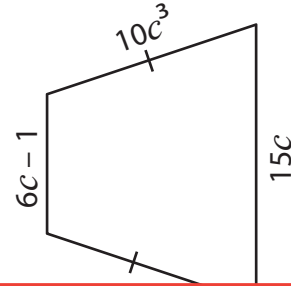
# Simplifying Algebraic Expressions

Simplify the algebraic expression and find the perimeter of each shape.

1)



2)



3)

P

# Preview

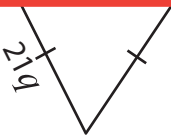
Become a member to unlock  
unrestricted access to both printable  
and online worksheets.



www.tutoringhour.com

P

5)



Perimeter = \_\_\_\_\_



Perimeter = \_\_\_\_\_

7) Find the perimeter of a parallelogram whose adjacent sides measure  $k + 9$  and  $k$ .

\_\_\_\_\_