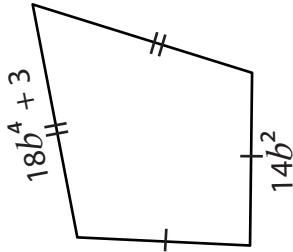


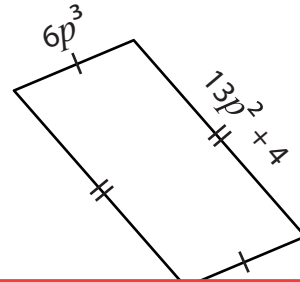
Simplifying Algebraic Expressions

Simplify the algebraic expression and find the perimeter of each shape.

1)



2)



3)

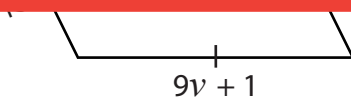
Preview

Become a member to unlock
unrestricted access to both printable
and online worksheets.

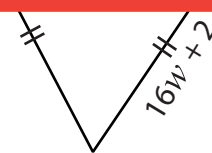
www.tutoringhour.com



5)



Perimeter = _____



Perimeter = _____

7) Find the perimeter of a rhombus whose sides measure $5c - 2$.
