


Measuring Angles | Clocks

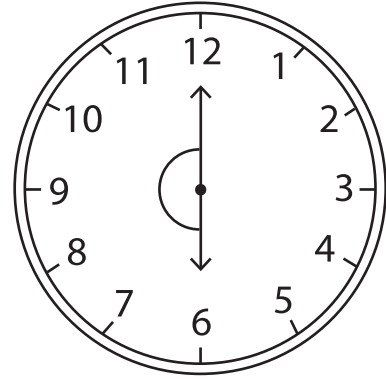
A) Find the angle formed between the hour and minute hands of each clock.

1)




Angle : _____

2)




Angle : _____

3)



Angle : _____


4)



Angle : _____

B) Draw a minute hand in each clock forming the given angle with the hour hand. (Hint: The hour hand moves corresponding to the movement of the minute hand.)

1) Angle : 74°



2) Angle : 125°

