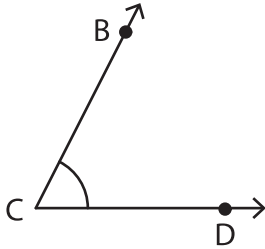


Measuring Angles

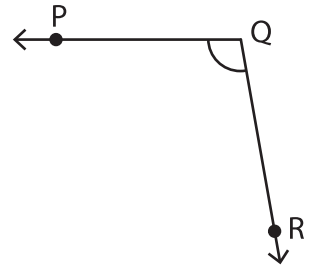
Measure each angle using a protractor.

1)



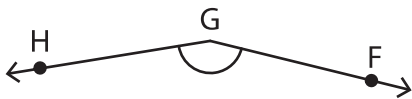
$$m\angle BCD = \underline{\hspace{2cm}}$$

2)



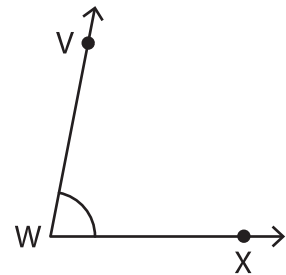
$$m\angle PQR = \underline{\hspace{2cm}}$$

3)



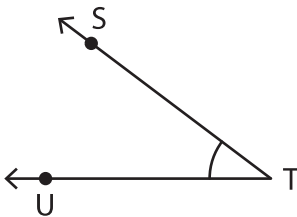
$$m\angle HGF = \underline{\hspace{2cm}}$$

4)



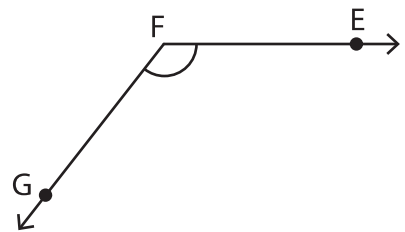
$$m\angle VWX = \underline{\hspace{2cm}}$$

5)



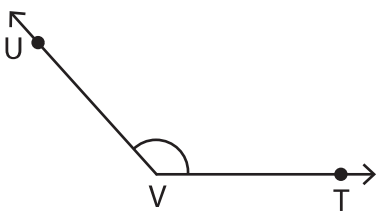
$$m\angle STU = \underline{\hspace{2cm}}$$

6)



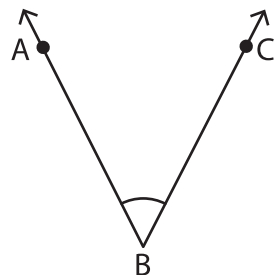
$$m\angle EFG = \underline{\hspace{2cm}}$$

7)



$$m\angle UVT = \underline{\hspace{2cm}}$$

8)



$$m\angle ABC = \underline{\hspace{2cm}}$$