

Measuring Reflex Angles

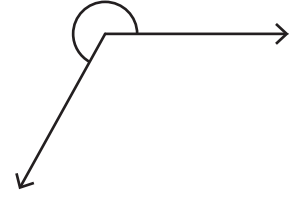
Measure each reflex angle.

1)



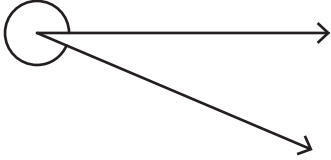
Angle: _____

2)



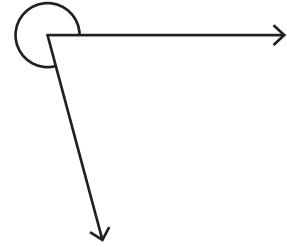
Angle: _____

3)



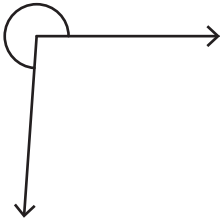
Angle: _____

4)



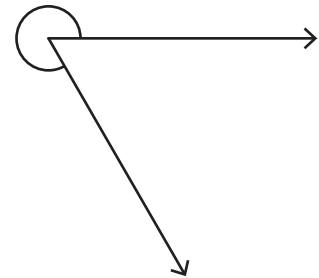
Angle: _____

5)



Angle: _____

6)



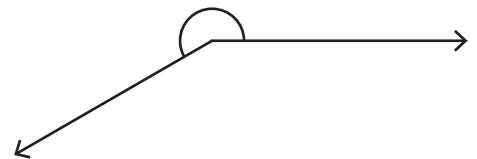
Angle: _____

7)



Angle: _____

8)



Angle: _____