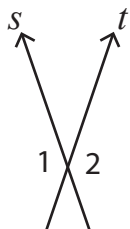


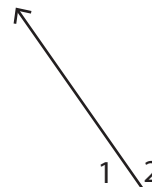
Pairs of Angles

In each figure, identify $\angle 1$ and $\angle 2$ as adjacent, vertical, or linear.

1) s and t are straight lines.



2) p is a straight line.



Preview

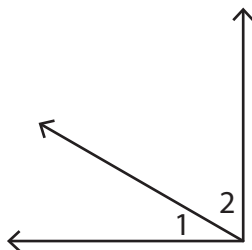
Become a member to unlock
unrestricted access to both printable
and online worksheets.



www.tutoringhour.com

3) w

5)



6) a and b are straight lines.

