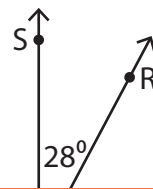
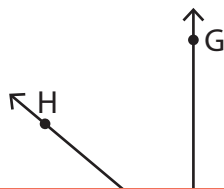
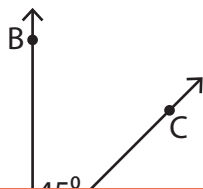


Complementary Angles

Determine the measure of the unknown angle in each pair of complementary angles.

1) 2) 3)



Preview

m.

4)

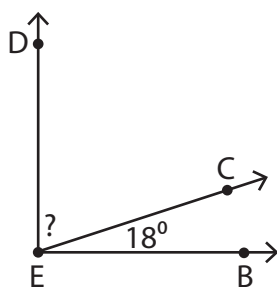
Become a member to unlock
unrestricted access to both printable
and online worksheets.



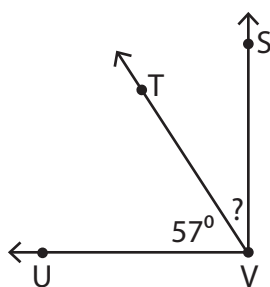
m.

www.tutoringhour.com

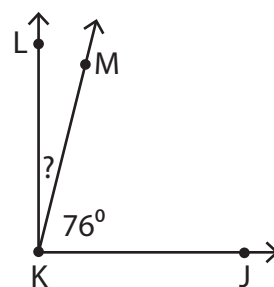
7) 8) 9)



$$m\angle CED = \underline{\hspace{2cm}}$$



$$m\angle SVT = \underline{\hspace{2cm}}$$



$$m\angle MKL = \underline{\hspace{2cm}}$$