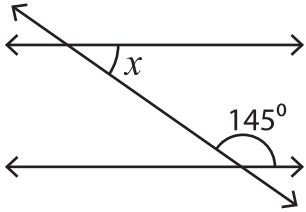


# Interior Angles

---

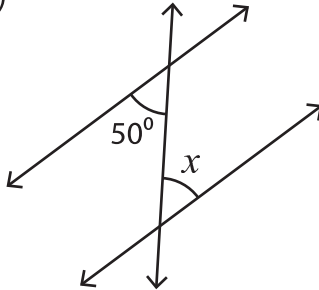
Find the value of  $x$ .

1)



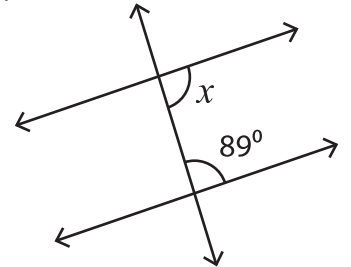
$x =$  \_\_\_\_\_

2)



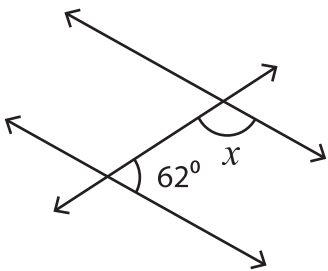
$x =$  \_\_\_\_\_

3)



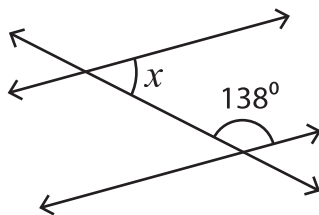
$x =$  \_\_\_\_\_

4)



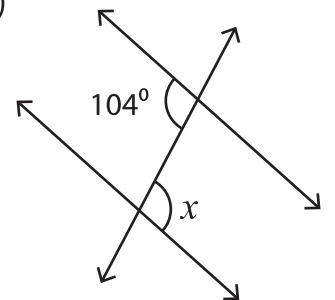
$x =$  \_\_\_\_\_

5)



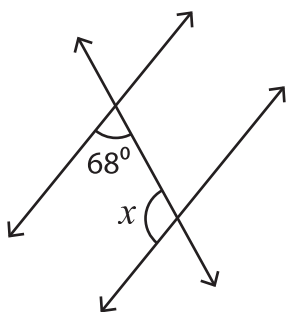
$x =$  \_\_\_\_\_

6)



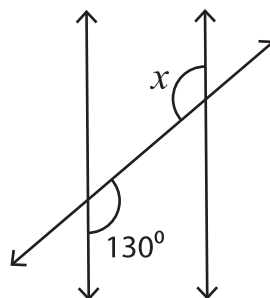
$x =$  \_\_\_\_\_

7)



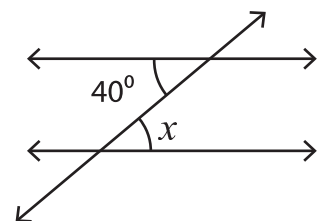
$x =$  \_\_\_\_\_

8)



$x =$  \_\_\_\_\_

9)



$x =$  \_\_\_\_\_