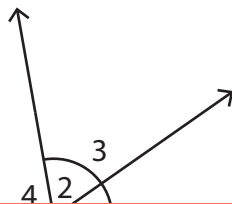


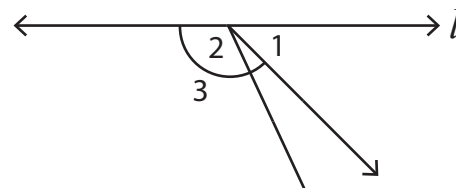
Linear Pair

Identify all the linear pairs of angles in each figure, where l is a straight line.

1)



2)



3)

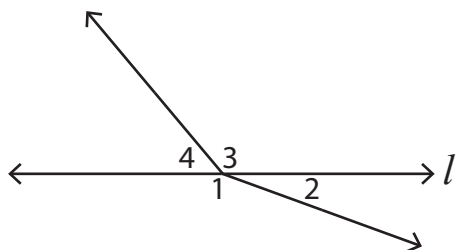
Preview

Become a member to unlock
unrestricted access to both printable
and online worksheets.



www.tutoringhour.com

5)



6)

