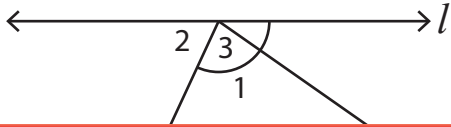


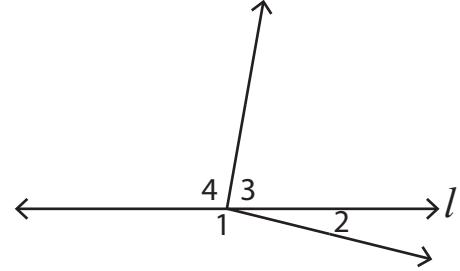
# Linear Pair

Identify all the linear pairs of angles in each figure, where  $l$  is a straight line.

1)



2)



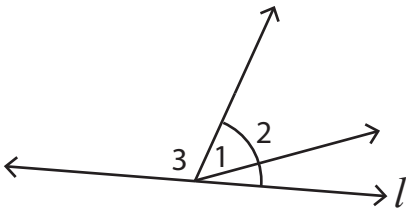
3)

**Become a member to unlock  
unrestricted access to both printable  
and online worksheets.**



[www.tutoringhour.com](http://www.tutoringhour.com)

5)



6)

