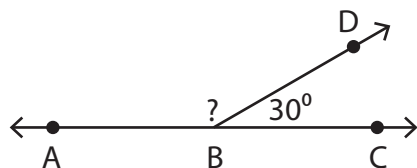


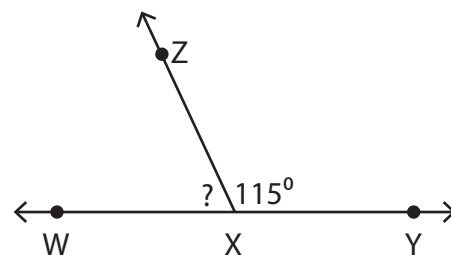
Linear Pair

Find the measure of the unknown angle in each linear pair of angles.

1)



2)



3)

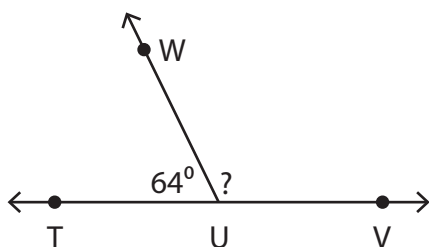
Preview

Become a member to unlock
unrestricted access to both printable
and online worksheets.



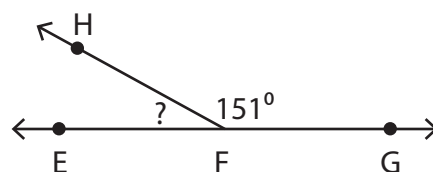
www.tutoringhour.com

5)



$$m\angle WUV = \underline{\hspace{2cm}}$$

6)



$$m\angle EFH = \underline{\hspace{2cm}}$$