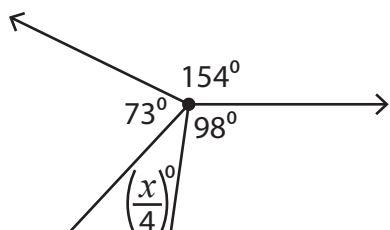


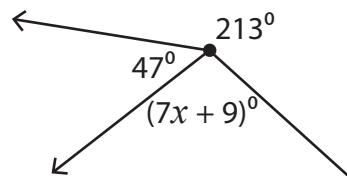
Angles around a Point

Find the value of x in each figure.

1)



2)



3)

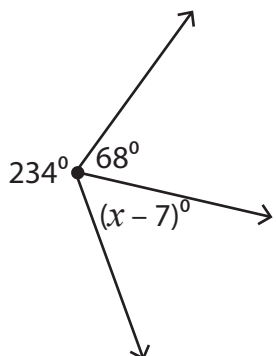
Preview

Become a member to unlock
unrestricted access to both printable
and online worksheets.



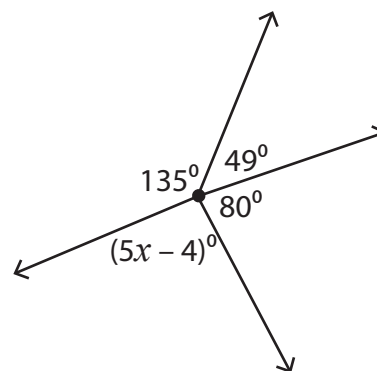
www.tutoringhour.com

5)



$x =$ _____

6)



$x =$ _____