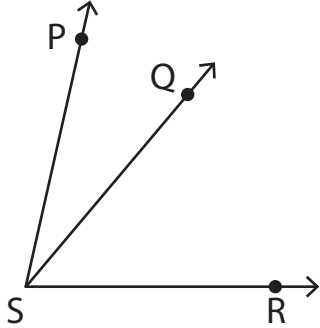


# Naming Angles

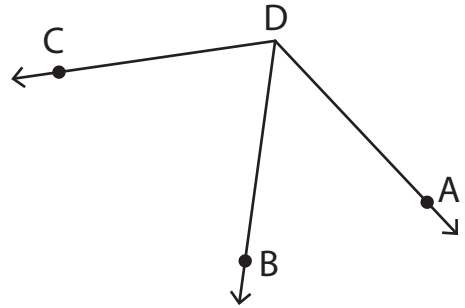
---

Name all the angles sharing a common vertex.

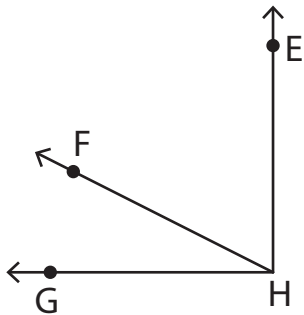
1)



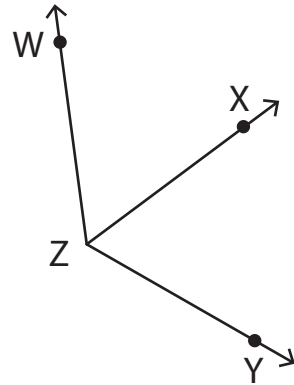
2)



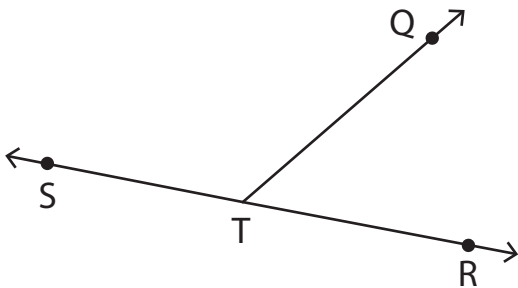
3)



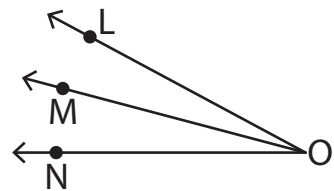
4)



5)



6)

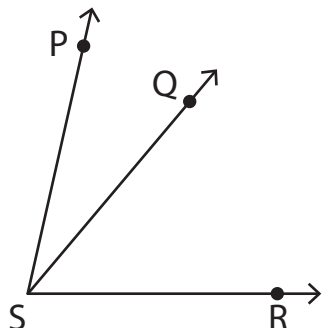


# Naming Angles

Answer key

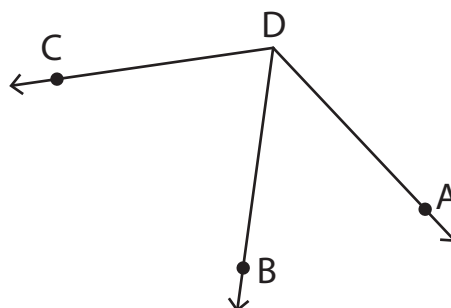
Name all the angles sharing a common vertex.

1)



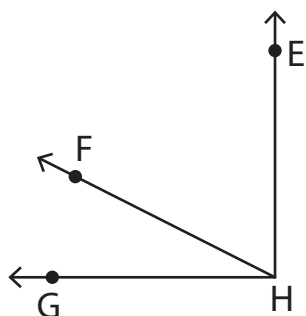
$\angle PSQ$  or  $\angle QSP$ ,  $\angle QSR$  or  $\angle RSQ$ ,  $\angle PSR$  or  $\angle RSP$

2)



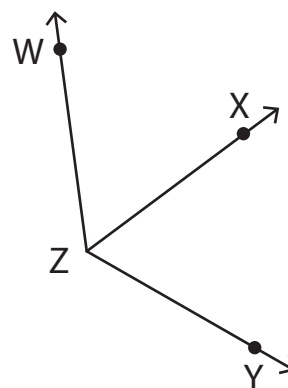
$\angle ADB$  or  $\angle BDA$ ,  $\angle BDC$  or  $\angle CDB$ ,  $\angle ADC$  or  $\angle CDA$

3)



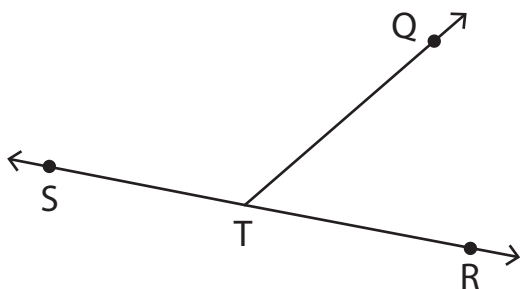
$\angle EHF$  or  $\angle FHE$ ,  $\angle FHG$  or  $\angle GHF$ ,  $\angle EHG$  or  $\angle GHE$

4)



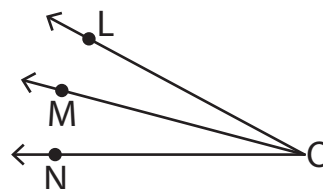
$\angle WZX$  or  $\angle XZW$ ,  $\angle XZY$  or  $\angle YZX$ ,  $\angle WZY$  or  $\angle YZW$

5)



$\angle QTR$  or  $\angle RTQ$ ,  $\angle RTS$  or  $\angle STR$ ,  $\angle QTS$  or  $\angle STQ$

6)



$\angle LOM$  or  $\angle MOL$ ,  $\angle MON$  or  $\angle NOM$ ,  $\angle LON$  or  $\angle NOL$