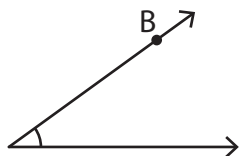


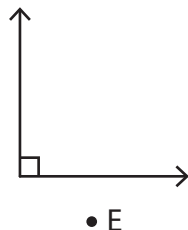
Interior and Exterior of an Angle

Identify if the given point is in the interior, exterior or on the angle.

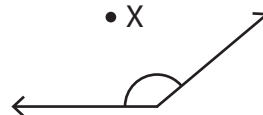
1)



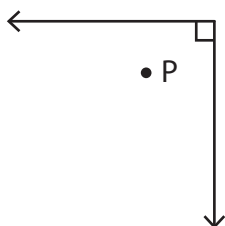
2)



3)



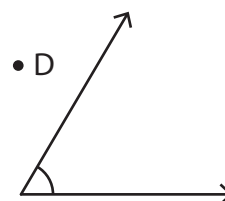
4)



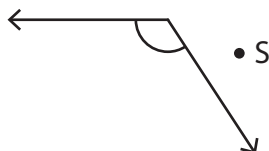
5)



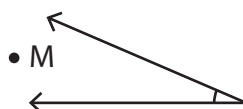
6)



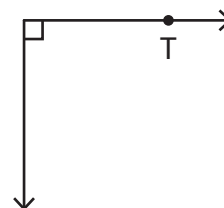
7)



8)



9)

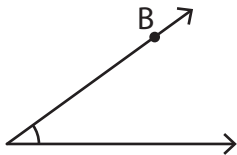


Interior and Exterior of an Angle

Answer key

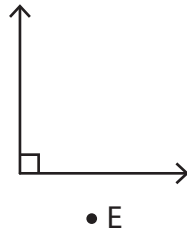
Identify if the given point is in the interior, exterior or on the angle.

1)



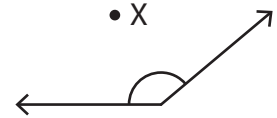
B is on the angle

2)



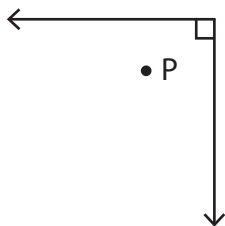
E is in the exterior

3)



X is in the interior

4)



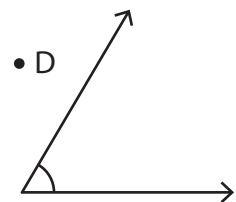
P is in the interior

5)



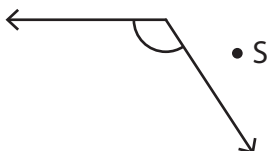
H is on the angle

6)



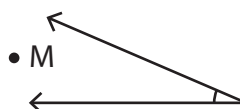
D is in the exterior

7)



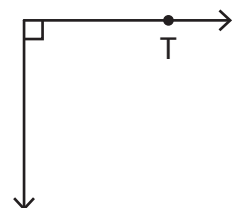
S is in the exterior

8)



M is in the interior

9)



T is on the angle