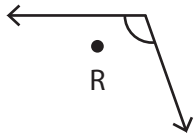


Interior and Exterior of an Angle

Choose whether the points are in the exterior, interior or on the angle.

1)

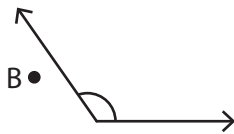


a) Exterior

b) Interior

c) On the angle

2)

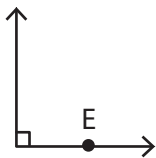


a) Interior

b) On the angle

c) Exterior

3)

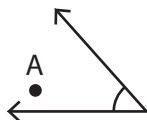


a) On the angle

b) Exterior

c) Interior

4)

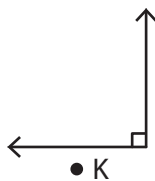


a) Exterior

b) On the angle

c) Interior

5)

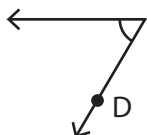


a) Interior

b) Exterior

c) On the angle

6)

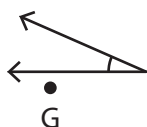


a) On the angle

b) Interior

c) Exterior

7)



a) Interior

b) On the angle

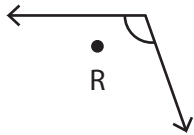
c) Exterior

Interior and Exterior of an Angle

Answer key

Choose whether the points are in the exterior, interior or on the angle.

1)

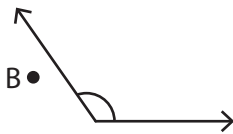


a) Exterior

b) Interior

c) On the angle

2)

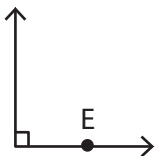


a) Interior

b) On the angle

c) Exterior

3)

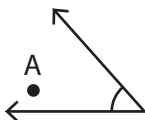


a) On the angle

b) Exterior

c) Interior

4)

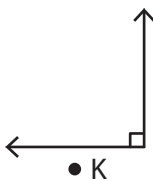


a) Exterior

b) On the angle

c) Interior

5)

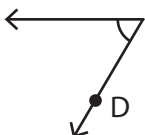


a) Interior

b) Exterior

c) On the angle

6)

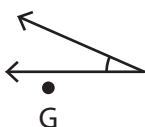


a) On the angle

b) Interior

c) Exterior

7)



a) Interior

b) On the angle

c) Exterior