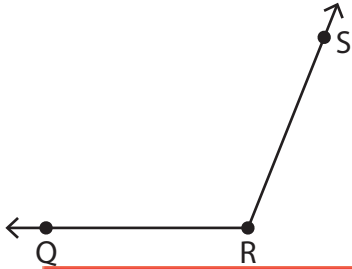


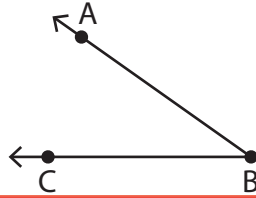
Parts of an Angle

Name the vertex and arms in each figure below.

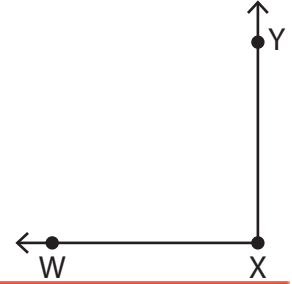
1)



2)



3)



4)

Preview

Become a member to unlock
unrestricted access to both printable
and online worksheets.

www.tutoringhour.com



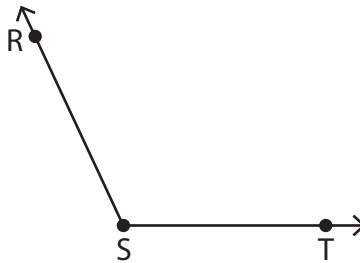
7)



Vertex: _____

Arms: _____

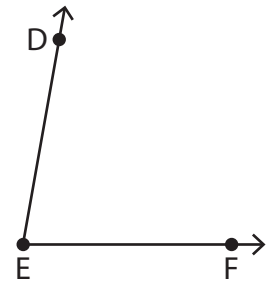
8)



Vertex: _____

Arms: _____

9)



Vertex: _____

Arms: _____