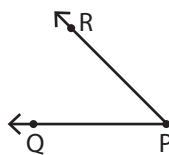


# Parts of an Angle

1) Which of the following is the vertex of the angle?

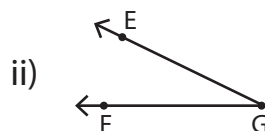
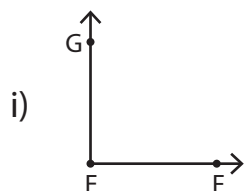


i) Q

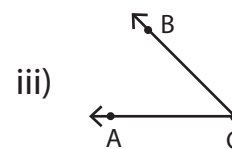
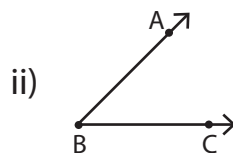
ii) R

iii) P

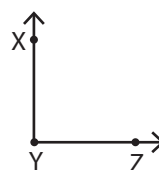
2) Which angle doesn't have  $\overrightarrow{EF}$  as one of its arms?



3) Find the angle with the arms  $\overrightarrow{AB}$  and  $\overrightarrow{AC}$ .



4) Which of the following is not an arm of the angle?



i)  $\overrightarrow{XZ}$

ii)  $\overrightarrow{YX}$

iii)  $\overrightarrow{YZ}$

5) Which angle has the vertex R?

