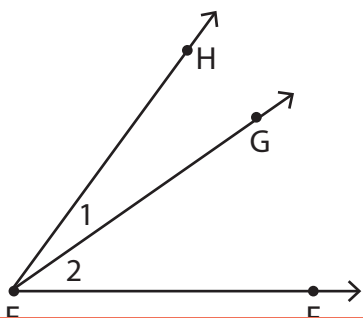


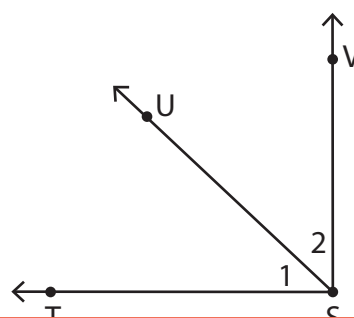
Parts of an Angle

Write the vertices and arms of the specified angles.

1)



2)



Ver

Ar

Preview

3)

Become a member to unlock
unrestricted access to both printable
and online worksheets.

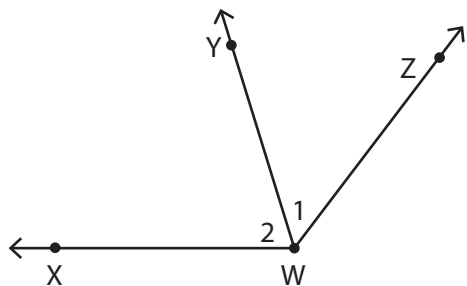
Ar

Ver

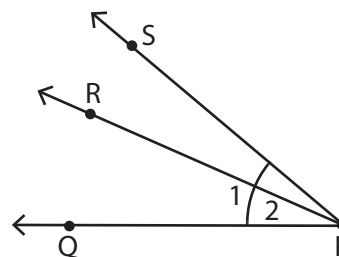
www.tutoringhour.com



5)



6)



Vertex of $\angle 1$: _____

Arms of $\angle 1$: _____

Arms of $\angle 2$: _____

Vertex of $\angle 2$: _____