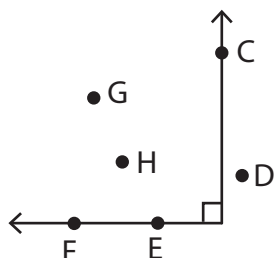


# Interior and Exterior of an Angle

Write the points that lie in the interior, exterior, and on the angle.

1)

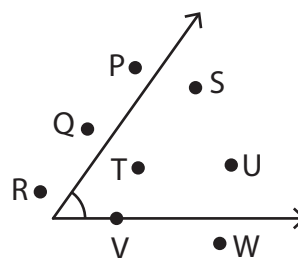


Points in the interior: \_\_\_\_\_

Points in the exterior: \_\_\_\_\_

Points on the angle: \_\_\_\_\_

2)

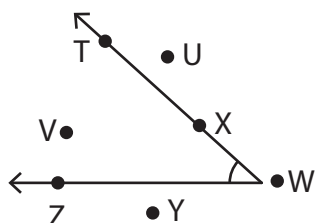


Points in the interior: \_\_\_\_\_

Points in the exterior: \_\_\_\_\_

Points on the angle: \_\_\_\_\_

3)

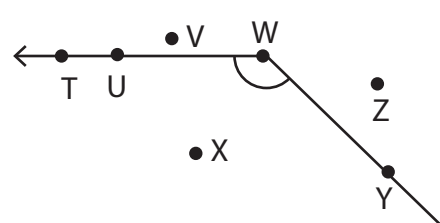


Points in the interior: \_\_\_\_\_

Points in the exterior: \_\_\_\_\_

Points on the angle: \_\_\_\_\_

4)

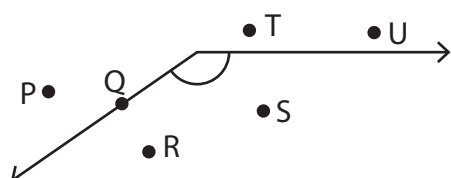


Points in the interior: \_\_\_\_\_

Points in the exterior: \_\_\_\_\_

Points on the angle: \_\_\_\_\_

5)

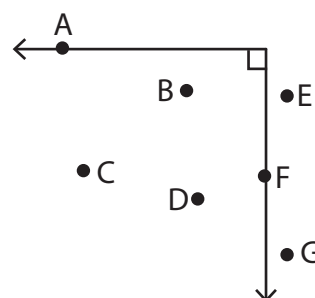


Points in the interior: \_\_\_\_\_

Points in the exterior: \_\_\_\_\_

Points on the angle: \_\_\_\_\_

6)



Points in the interior: \_\_\_\_\_

Points in the exterior: \_\_\_\_\_

Points on the angle: \_\_\_\_\_