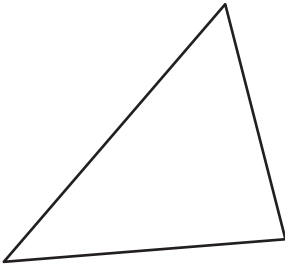


# Angles in Polygons

---

Find the sum of the interior angles of each polygon.

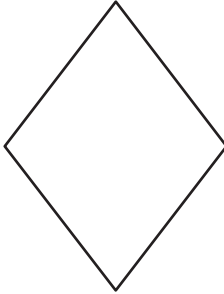
1)



Number of sides = \_\_\_\_\_

Sum of the interior angles = \_\_\_\_\_

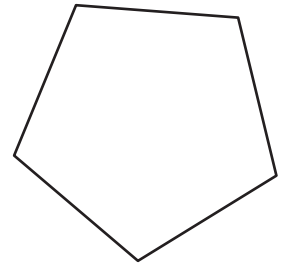
2)



Number of sides = \_\_\_\_\_

Sum of the interior angles = \_\_\_\_\_

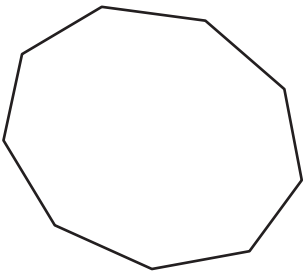
3)



Number of sides = \_\_\_\_\_

Sum of the interior angles = \_\_\_\_\_

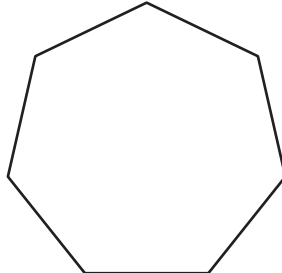
4)



Number of sides = \_\_\_\_\_

Sum of the interior angles = \_\_\_\_\_

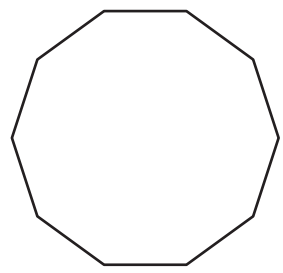
5)



Number of sides = \_\_\_\_\_

Sum of the interior angles = \_\_\_\_\_

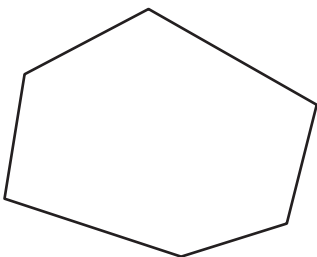
6)



Number of sides = \_\_\_\_\_

Sum of the interior angles = \_\_\_\_\_

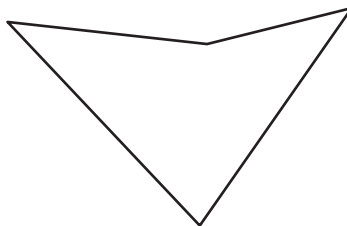
7)



Number of sides = \_\_\_\_\_

Sum of the interior angles = \_\_\_\_\_

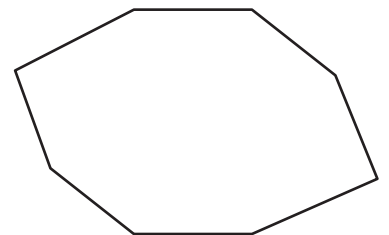
8)



Number of sides = \_\_\_\_\_

Sum of the interior angles = \_\_\_\_\_

9)



Number of sides = \_\_\_\_\_

Sum of the interior angles = \_\_\_\_\_