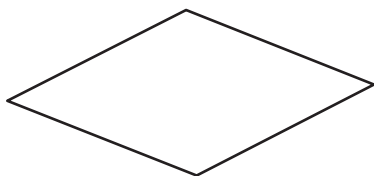


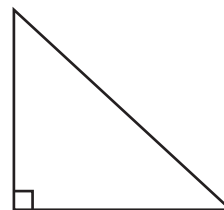
Acute, Right, and Obtuse Angles

Count and write the number of angles of each type in the following figures.

1)



2)



3)

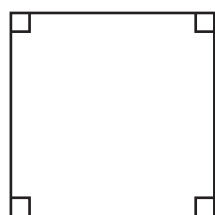
Preview

Become a member to unlock
unrestricted access to both printable
and online worksheets.



www.tutoringhour.com

5)

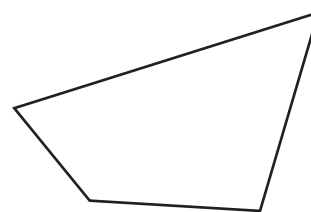


Number of acute angles: _____

Number of right angles: _____

Number of obtuse angles: _____

6)



Number of acute angles: _____

Number of right angles: _____

Number of obtuse angles: _____