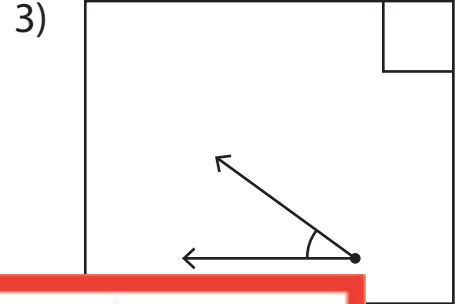
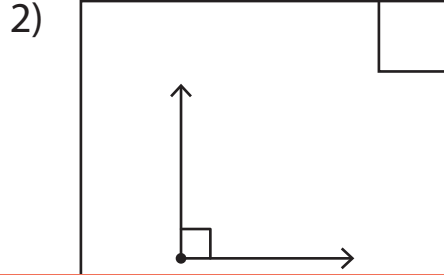
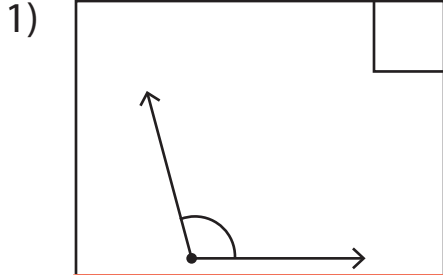


# Acute, Right, and Obtuse Angles

Write "A" if the angles are acute, "O" if they're obtuse, and "R" if they're right.



4)

# Preview

Become a member to unlock  
unrestricted access to both printable  
and online worksheets.

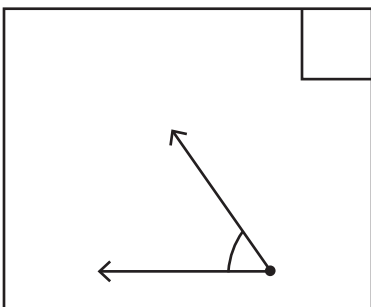


7)

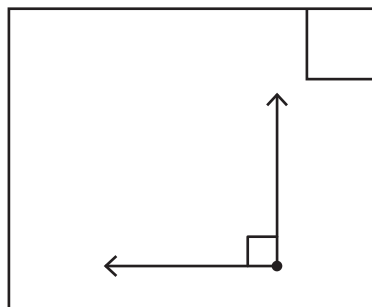
[www.tutoringhour.com](http://www.tutoringhour.com)



10)



11)



12)

