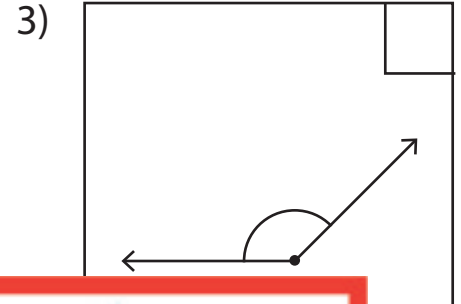
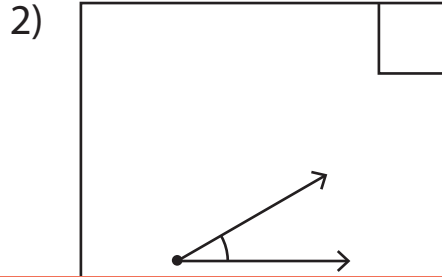
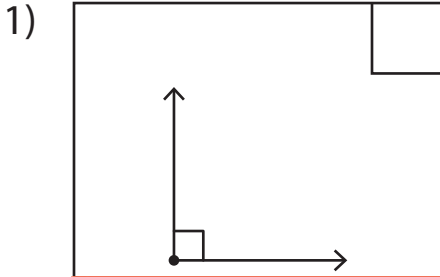


Acute, Right, and Obtuse Angles

Write "A" if the angles are acute, "O" if they're obtuse, and "R" if they're right.



4)

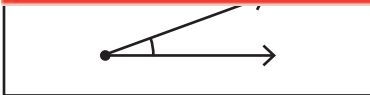
Preview

Become a member to unlock
unrestricted access to both printable
and online worksheets.

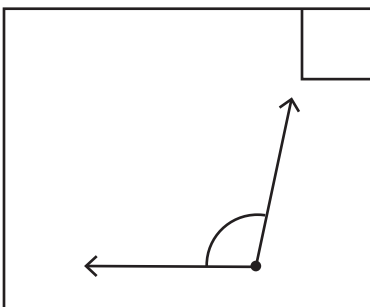


7)

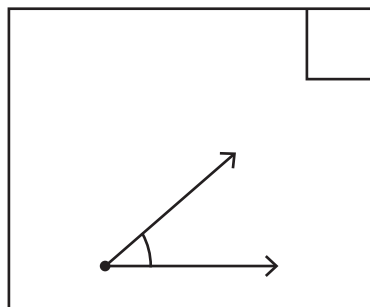
www.tutoringhour.com



10)



11)



12)

