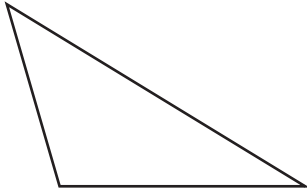


Acute, Right and Obtuse Angles

Count the number of angles of each type in the following figures.

1)

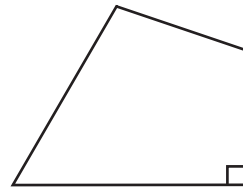


Number of acute angles : _____

Number of right angles : _____

Number of obtuse angles : _____

2)

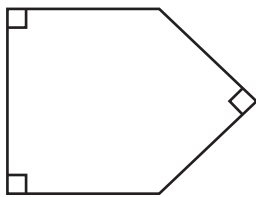


Number of acute angles : _____

Number of right angles : _____

Number of obtuse angles : _____

3)

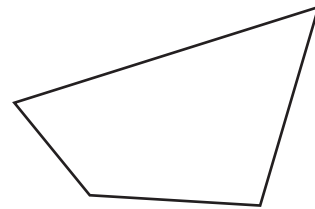


Number of acute angles : _____

Number of right angles : _____

Number of obtuse angles : _____

4)



Number of acute angles : _____

Number of right angles : _____

Number of obtuse angles : _____

5)



Number of acute angles : _____

Number of right angles : _____

Number of obtuse angles : _____

6)



Number of acute angles : _____

Number of right angles : _____

Number of obtuse angles : _____