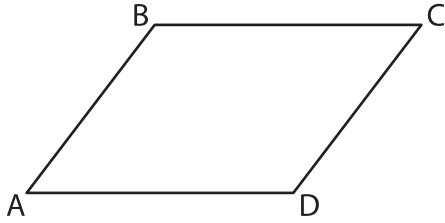


Types of Angles

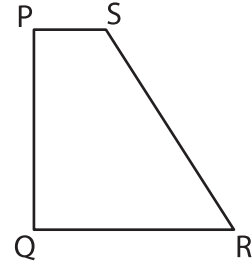
Identify the type of each indicated angle.

1)



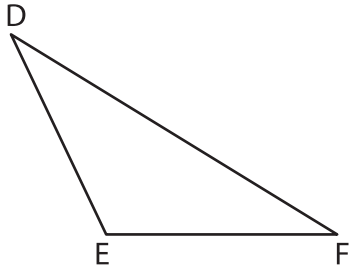
$\angle BCD =$ _____

2)



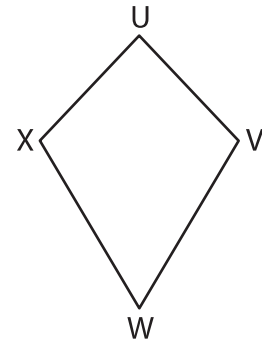
$\angle PQR =$ _____

3)



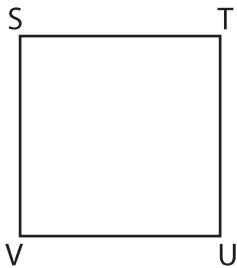
$\angle DEF =$ _____

4)



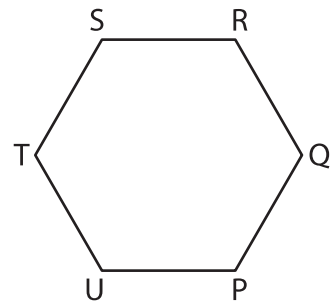
$\angle XWV =$ _____

5)



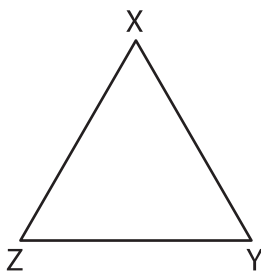
$\angle STU =$ _____

6)




$\angle UPQ =$ _____

7)



$\angle XZY =$ _____

8)



$\angle KLM =$ _____