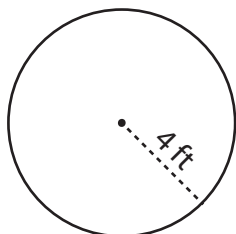


# Area of a Circle

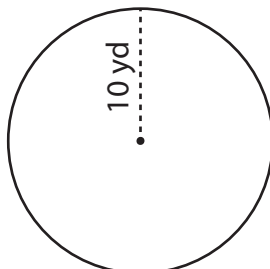
Find the area of each circle. (use  $\pi = 3.14$ )

1)



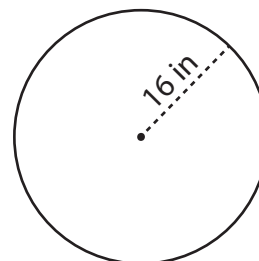
Area = \_\_\_\_\_

2)



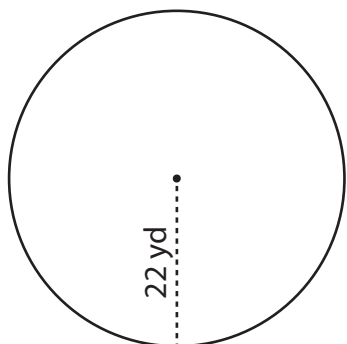
Area = \_\_\_\_\_

3)



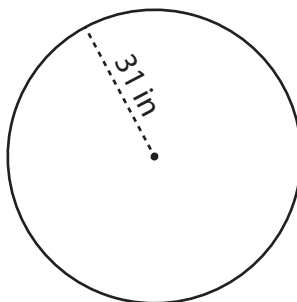
Area = \_\_\_\_\_

4)



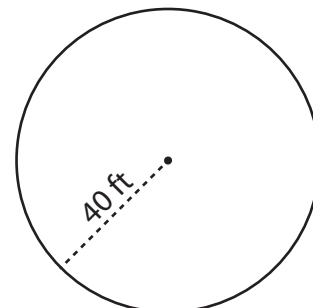
Area = \_\_\_\_\_

5)



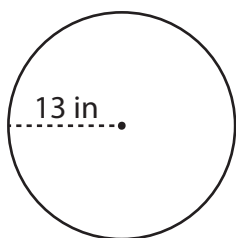
Area = \_\_\_\_\_

6)



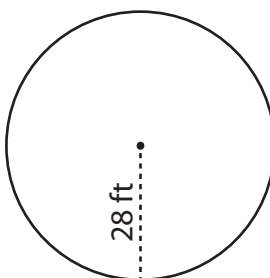
Area = \_\_\_\_\_

7)



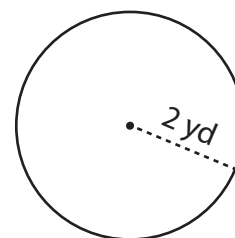
Area = \_\_\_\_\_

8)



Area = \_\_\_\_\_

9)



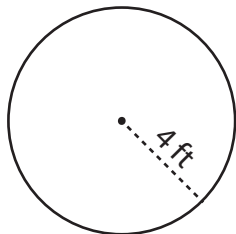
Area = \_\_\_\_\_

# Area of a Circle

Answer Key

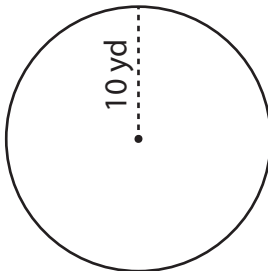
Find the area of each circle. (use  $\pi = 3.14$ )

1)



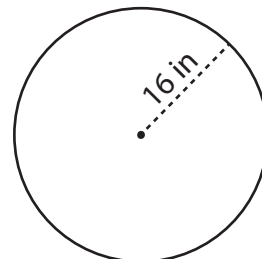
Area = 50.24 ft<sup>2</sup>

2)



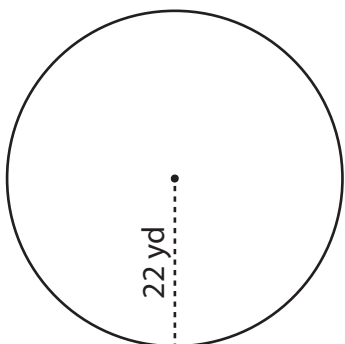
Area = 314 yd<sup>2</sup>

3)



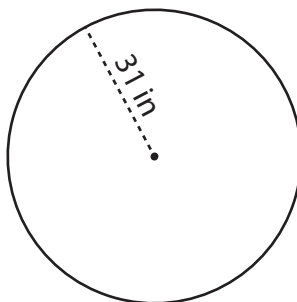
Area = 803.84 in<sup>2</sup>

4)



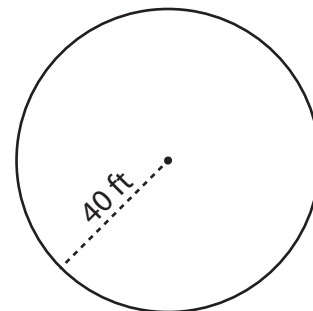
Area = 1,519.76 yd<sup>2</sup>

5)



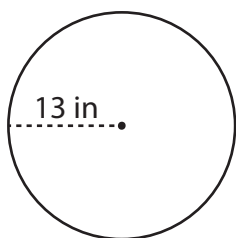
Area = 3,017.54 in<sup>2</sup>

6)



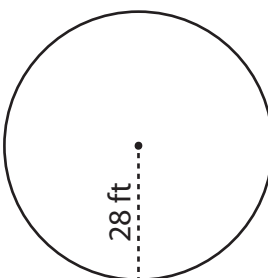
Area = 5,024 ft<sup>2</sup>

7)



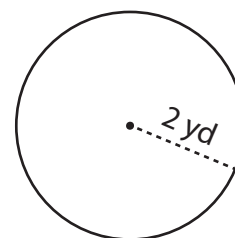
Area = 530.66 in<sup>2</sup>

8)



Area = 2,461.76 ft<sup>2</sup>

9)



Area = 12.56 yd<sup>2</sup>