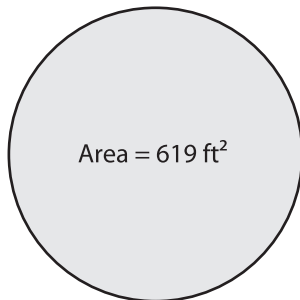


Finding Diameter from Area

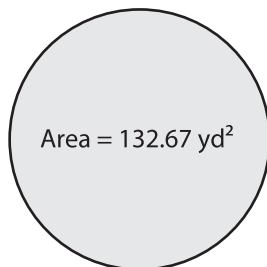
Find the diameter of each circle using the given area. Round your answer to the nearest tenth. (use $\pi = 3.14$)

1)



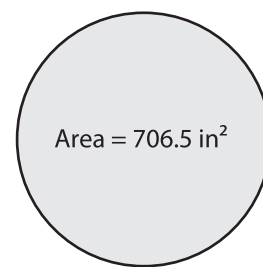
Diameter = _____

2)



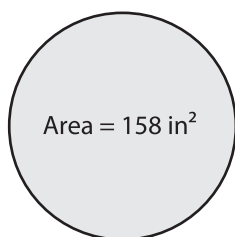
Diameter = _____

3)



Diameter = _____

4)



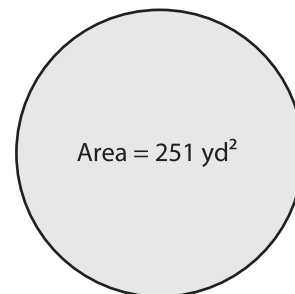
Diameter = _____

5)



Diameter = _____

6)



Diameter = _____

7)



Diameter = _____

8)



Diameter = _____

9)



Diameter = _____