

# Finding Diameter from Area

---

Find the diameter of each circle using the given area. Round your answer to the nearest tenth. (use  $\pi = 3.14$ )

1)



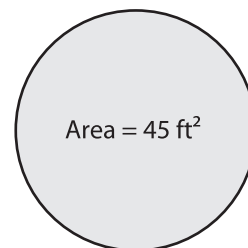
Diameter = \_\_\_\_\_

2)



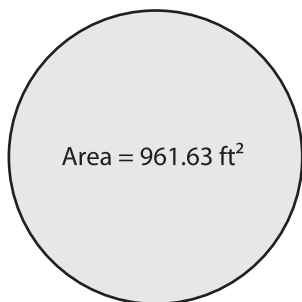
Diameter = \_\_\_\_\_

3)



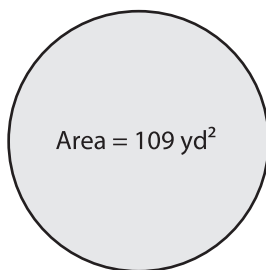
Diameter = \_\_\_\_\_

4)



Diameter = \_\_\_\_\_

5)



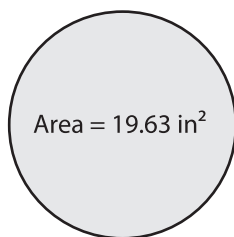
Diameter = \_\_\_\_\_

6)



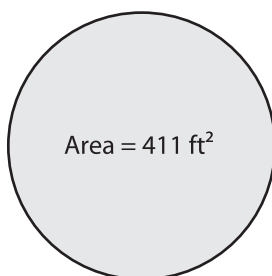
Diameter = \_\_\_\_\_

7)



Diameter = \_\_\_\_\_

8)



Diameter = \_\_\_\_\_

9)



Diameter = \_\_\_\_\_