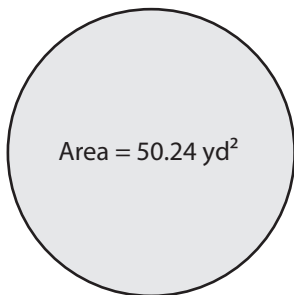


Finding Radius from Area

Find the radius of each circle using the given area. Round your answer to the nearest tenth. (use $\pi = 3.14$)

1)



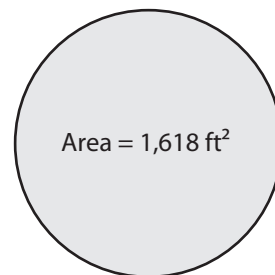
Radius = _____

2)



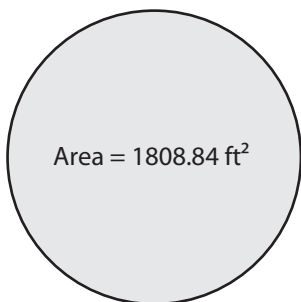
Radius = _____

3)



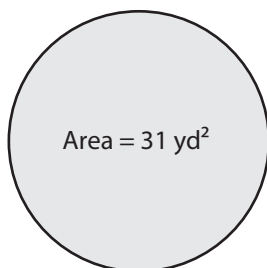
Radius = _____

4)



Radius = _____

5)



Radius = _____

6)



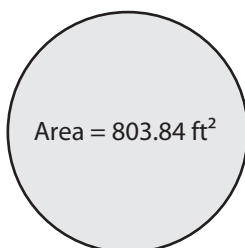
Radius = _____

7)



Radius = _____

8)



Radius = _____

9)



Radius = _____