



Area | Counting Squares

Calculate the area of each shape by counting the squares.

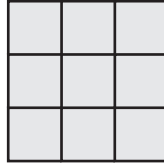
 = 1 ft²

1)




Area = _____

2)




Area = _____

3)




Area = _____

4)




Area = _____

5)




Area = _____

6)



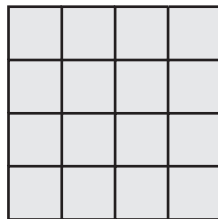
Area = _____

7)




Area = _____

8)




Area = _____

9)




Area = _____

10)




Area = _____

11)



Area = _____

12)




Area = _____


Area | Counting Squares

Answer Key

Calculate the area of each shape by counting the squares.

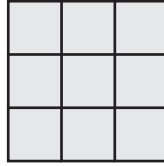
 = 1 ft²

1)




Area = 24 ft²

2)



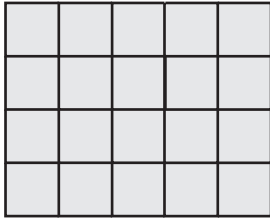
Area = 9 ft²

3)




Area = 18 ft²

4)




Area = 20 ft²

5)




Area = 8 ft²

6)



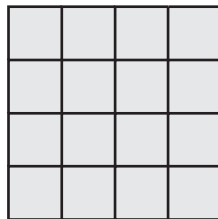
Area = 15 ft²

7)




Area = 36 ft²

8)




Area = 16 ft²

9)




Area = 30 ft²

10)




Area = 12 ft²

11)



Area = 25 ft²

12)



Area = 20 ft²