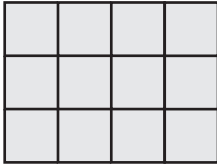


# Area | Counting Squares


Calculate the area of each shape by counting the squares.

1) Scale:  $\square = 5 \text{ ft}^2$



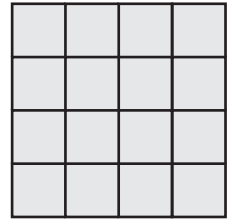
Area = \_\_\_\_\_

2) Scale:  $\square = 4 \text{ in}^2$



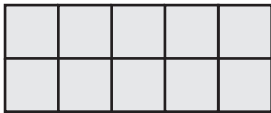
Area = \_\_\_\_\_

3) Scale:  $\square = 1 \text{ yd}^2$




Area = \_\_\_\_\_

4) Scale:  $\square = 2 \text{ in}^2$



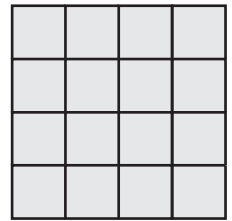
Area = \_\_\_\_\_

5) Scale:  $\square = 5 \text{ yd}^2$




Area = \_\_\_\_\_

6) Scale:  $\square = 3 \text{ ft}^2$



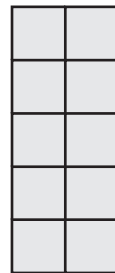
Area = \_\_\_\_\_

7) Scale:  $\square = 1 \text{ yd}^2$



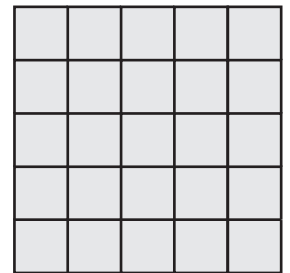
Area = \_\_\_\_\_

8) Scale:  $\square = 3 \text{ ft}^2$



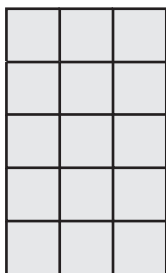
Area = \_\_\_\_\_

9) Scale:  $\square = 4 \text{ in}^2$



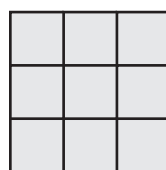
Area = \_\_\_\_\_

10) Scale:  $\square = 3 \text{ ft}^2$




Area = \_\_\_\_\_

11) Scale:  $\square = 4 \text{ in}^2$



Area = \_\_\_\_\_

12) Scale:  $\square = 2 \text{ yd}^2$




Area = \_\_\_\_\_

# Area | Counting Squares

Answer Key


Calculate the area of each shape by counting the squares.

1) Scale:  $\square = 5 \text{ ft}^2$



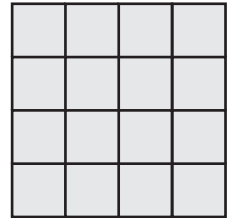
Area = 60 ft<sup>2</sup>

2) Scale:  $\square = 4 \text{ in}^2$



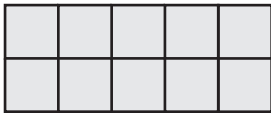
Area = 80 in<sup>2</sup>

3) Scale:  $\square = 1 \text{ yd}^2$




Area = 16 yd<sup>2</sup>

4) Scale:  $\square = 2 \text{ in}^2$



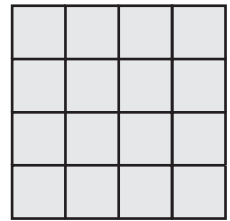
Area = 20 in<sup>2</sup>

5) Scale:  $\square = 5 \text{ yd}^2$




Area = 120 yd<sup>2</sup>

6) Scale:  $\square = 3 \text{ ft}^2$



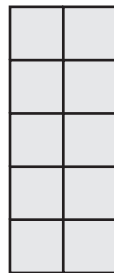
Area = 48 ft<sup>2</sup>

7) Scale:  $\square = 1 \text{ yd}^2$



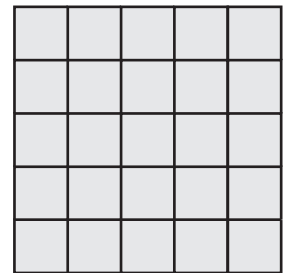
Area = 18 yd<sup>2</sup>

8) Scale:  $\square = 3 \text{ ft}^2$



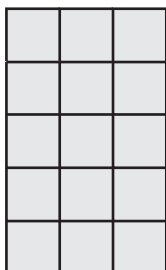
Area = 30 ft<sup>2</sup>

9) Scale:  $\square = 4 \text{ in}^2$



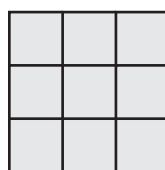
Area = 100 in<sup>2</sup>

10) Scale:  $\square = 3 \text{ ft}^2$




Area = 45 ft<sup>2</sup>

11) Scale:  $\square = 4 \text{ in}^2$



Area = 36 in<sup>2</sup>

12) Scale:  $\square = 2 \text{ yd}^2$



Area = 40 yd<sup>2</sup>