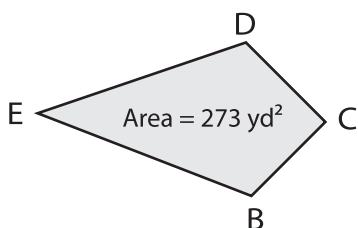


Kite | Missing Diagonal

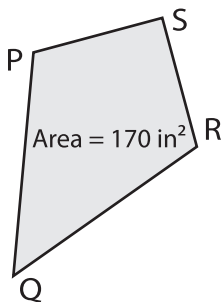
Find the length of the missing diagonal in each kite.

1) Find BD if EC = 26 yd.



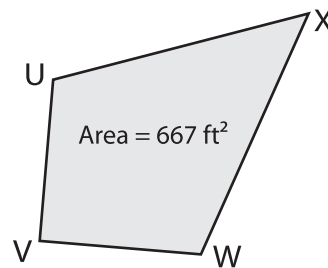
BD = _____

2) Find PR if QS = 34 in.



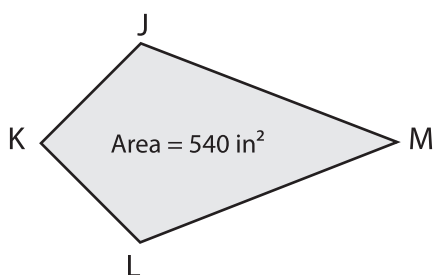
PR = _____

3) Find VX if UW = 29 ft.



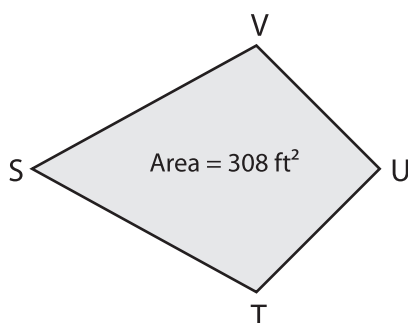
VX = _____

4) Find LJ if KM = 40 in.



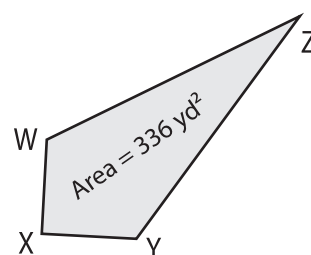
LJ = _____

5) Find SU if TV = 22 ft.



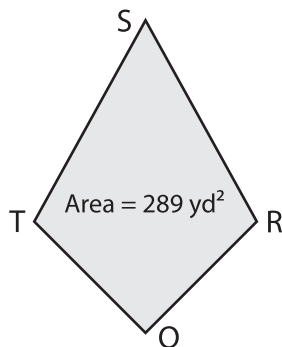
SU = _____

6) Find XZ if WY = 14 yd.



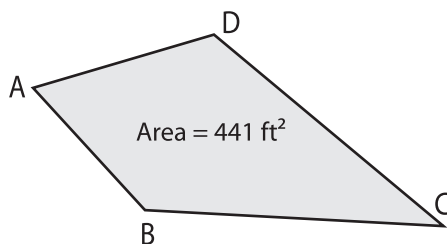
XZ = _____

7) Find TR if QS = 34 yd.



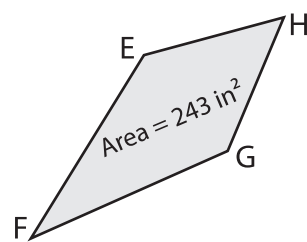
TR = _____

8) Find AC if BD = 18 ft.



AC = _____

9) Find EG if FH = 36 in.



EG = _____