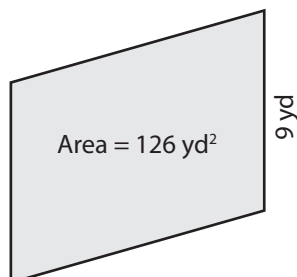


Finding the Base or Height

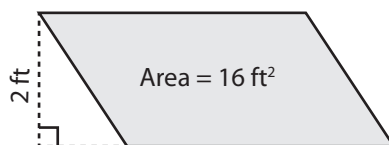
Find the base or height of each parallelogram.

1)



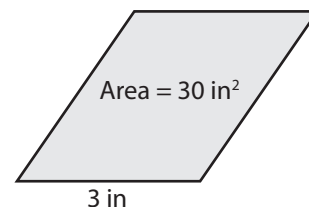
Height = _____

2)



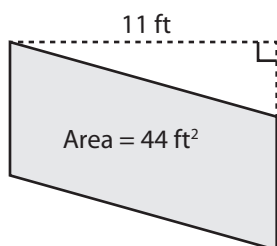
Base = _____

3)



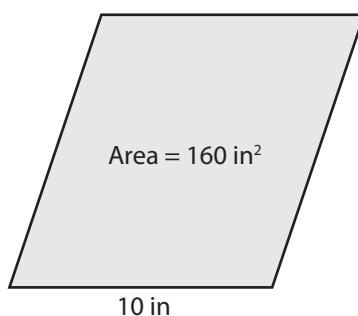
Height = _____

4)



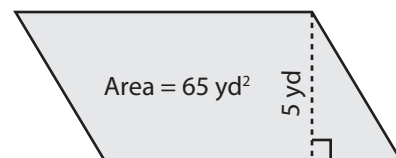
Base = _____

5)



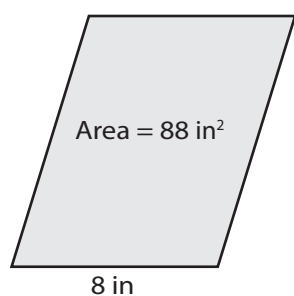
Height = _____

6)



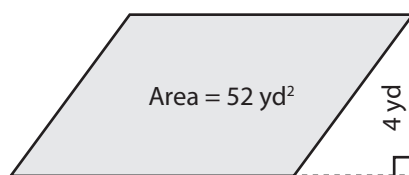
Base = _____

7)



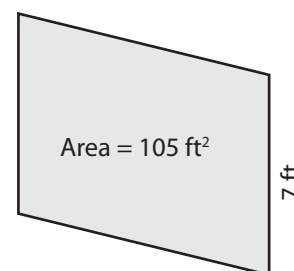
Height = _____

8)



Base = _____

9)



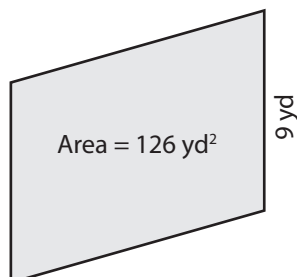
Height = _____

Finding the Base or Height

Answer Key

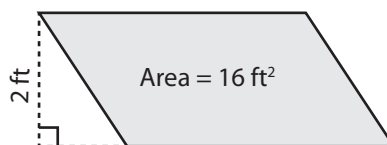
Find the base or height of each parallelogram.

1)



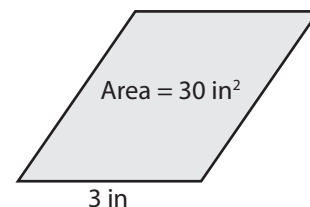
Height = 14 yd

2)



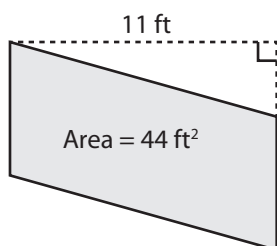
Base = 8 ft

3)



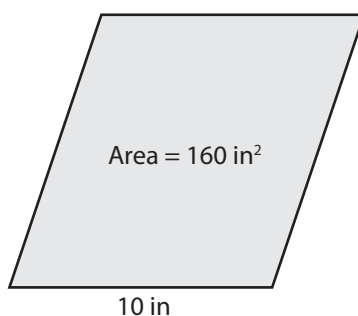
Height = 10 in

4)



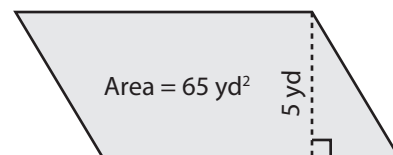
Base = 4 ft

5)



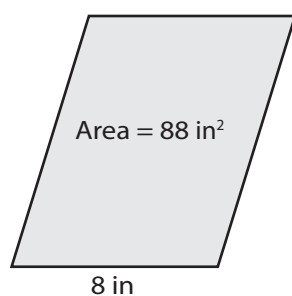
Height = 16 in

6)



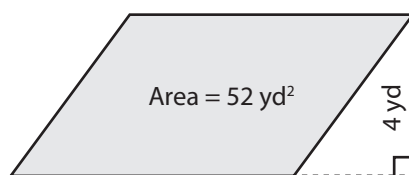
Base = 13 yd

7)



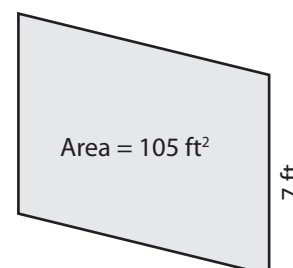
Height = 11 in

8)



Base = 13 yd

9)



Height = 15 ft