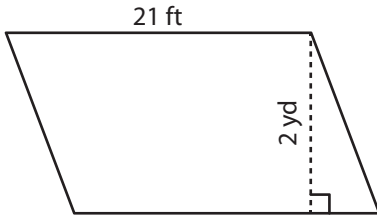


Area of a Parallelogram

Find the area of each parallelogram.

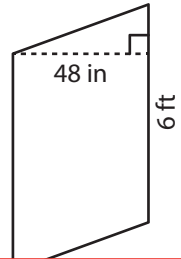
1)



2)



3)



4)

Ar

Preview

ft²

Become a member to unlock
unrestricted access to both printable
and online worksheets.

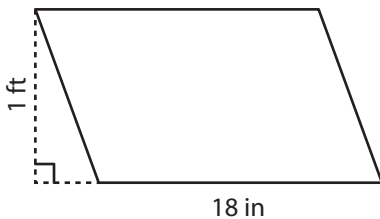


Ar

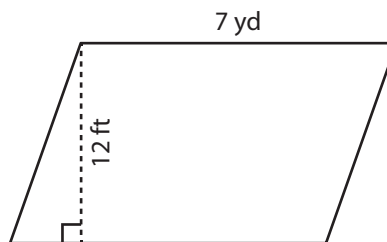
in²

www.tutoringhour.com

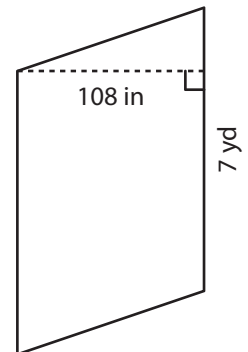
7)



8)



9)



Area = _____ in²

Area = _____ ft²

Area = _____ yd²