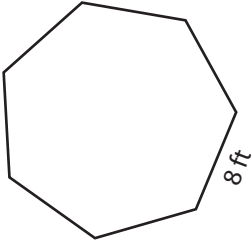


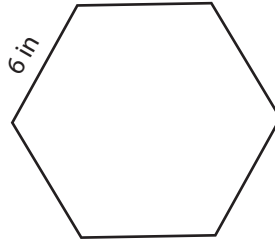
Polygons | Area and Perimeter

A) Find the perimeter of each polygon.

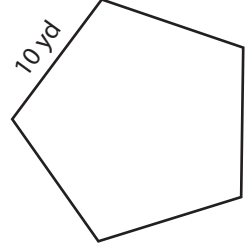
1)



2)



3)



4)

Preview

Become a member to unlock
unrestricted access to both printable
and online worksheets.

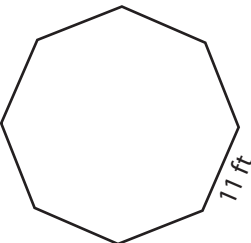


www.tutoringhour.com


14 in

1)

4)



5)



6)

