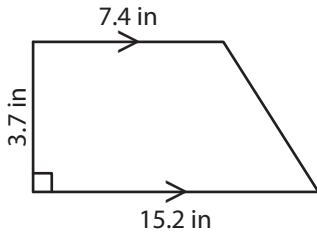


Area of a Quadrilateral

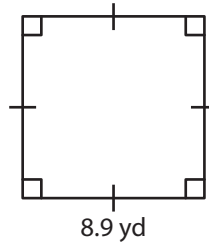
Find the area of each quadrilateral.

1)



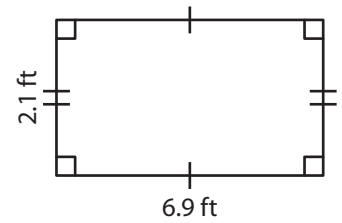
Area = _____

2)



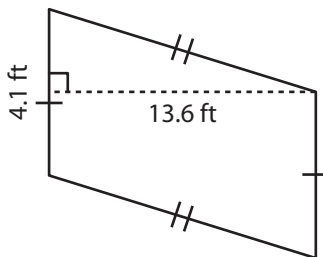
Area = _____

3)



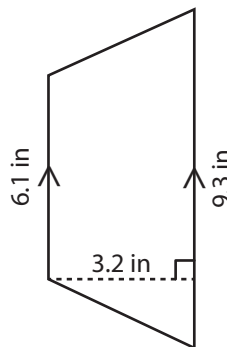
Area = _____

4)



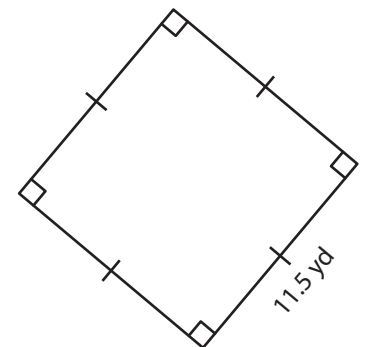
Area = _____

5)



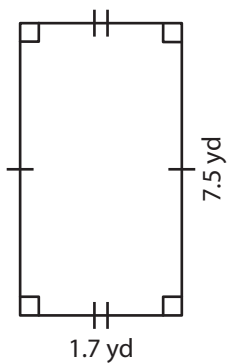
Area = _____

6)



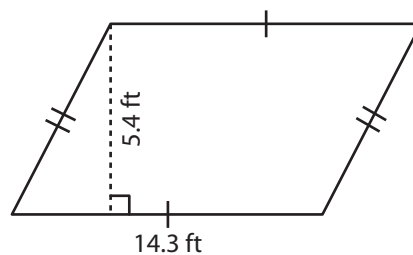
Area = _____

7)



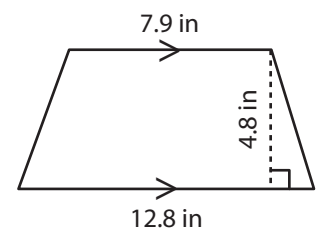
Area = _____

8)



Area = _____

9)



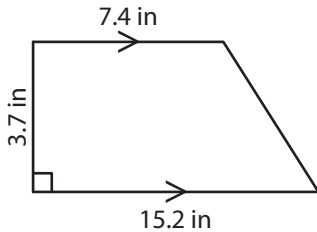
Area = _____

Area of a Quadrilateral

Answer Key

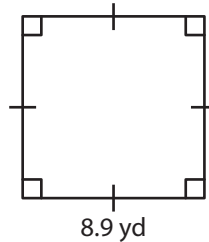
Find the area of each quadrilateral.

1)



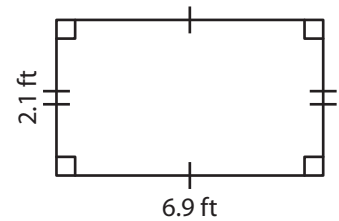
Area = 41.81 in²

2)



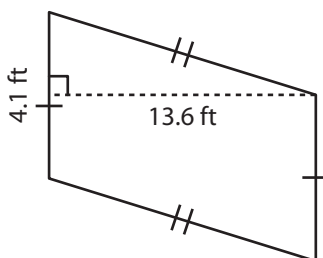
Area = 79.21 yd²

3)



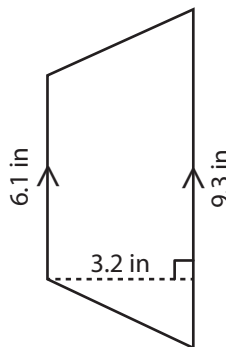
Area = 14.49 ft²

4)



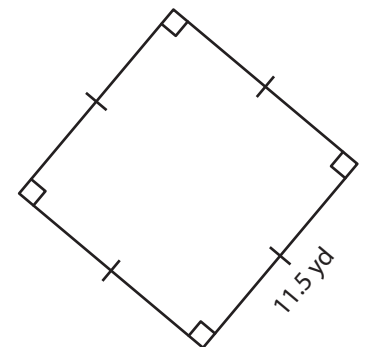
Area = 55.76 ft²

5)



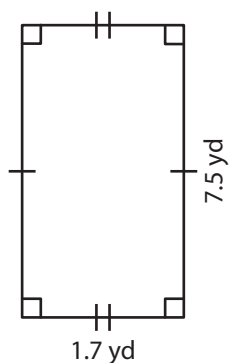
Area = 24.64 in²

6)



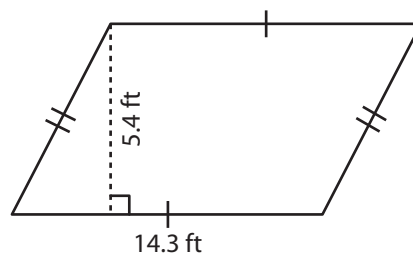
Area = 132.25 yd²

7)



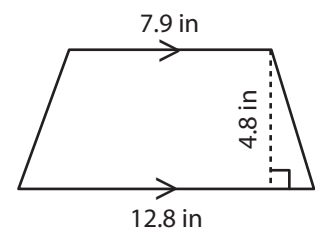
Area = 12.75 yd²

8)



Area = 77.22 ft²

9)



Area = 49.68 in²