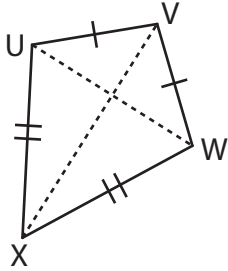


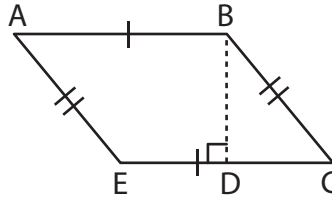
Area of a Quadrilateral

Find the area of each quadrilateral.

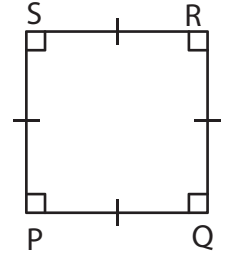
1)



2)



3)

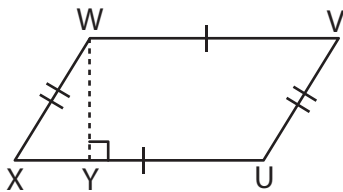


Preview

Become a member to unlock
unrestricted access to both printable
and online worksheets.

www.tutoringhour.com

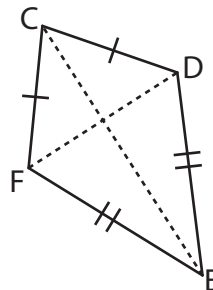
7)



$XU = 14 \text{ yd}$, $WY = 9 \text{ yd}$

Area = _____

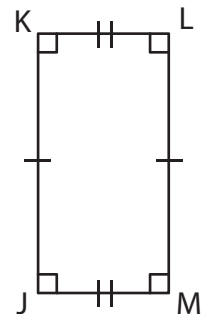
8)



$FD = 7 \text{ in}$, $CE = 11 \text{ in}$

Area = _____

9)



$LM = 13 \text{ ft}$, $JM = 5 \text{ ft}$

Area = _____