

Rectangles | Finding Area from Perimeter

Find the area of each rectangle using the given perimeter.

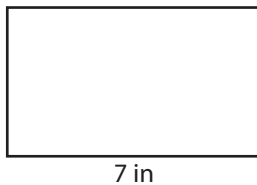
1) Perimeter = 48 ft



Length = _____

Area = _____

2) Perimeter = 26 in



Width = _____

Area = _____

3) Perimeter = 52 yd



Length = _____

Area = _____

4) Perimeter = 34 in



Width = _____

Area = _____

5) Perimeter = 68 yd



Length = _____

Area = _____


6) Perimeter = 14 ft



Width = _____

Area = _____

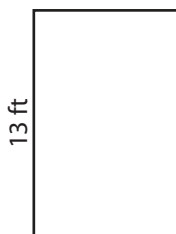
7) Perimeter = 54 yd



Length = _____

Area = _____


8) Perimeter = 40 ft



Width = _____

Area = _____

9) Perimeter = 22 in



Length = _____

Area = _____