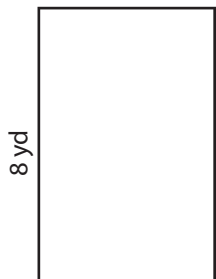


Rectangles | Finding Area from Perimeter

Find the area of each rectangle using the given perimeter.


1) Perimeter = 20 yd



2) Perimeter = 56 ft



3) Perimeter = 32 in



W
A
4) Per


Preview

Become a member to unlock
unrestricted access to both printable
and online worksheets.



www.tutoringhour.com

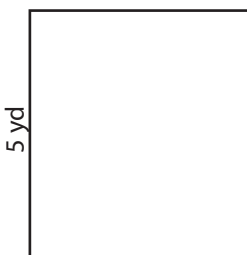
7) Perimeter = 28 in



Length = _____

Area = _____

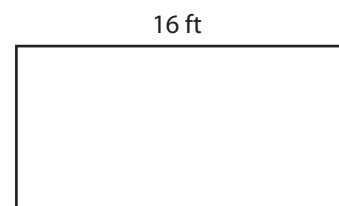
8) Perimeter = 18 yd



Width = _____

Area = _____

9) Perimeter = 36 ft



Width = _____

Area = _____