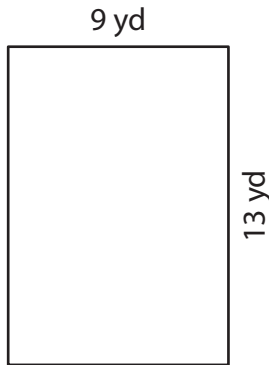


Area of a Rectangle

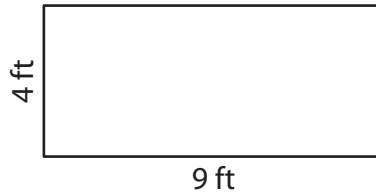
Find the area of each rectangle.

1)



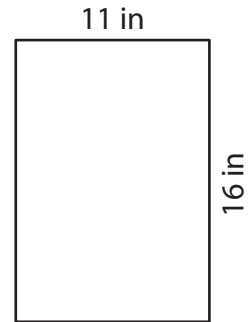
Area = _____

2)



Area = _____

3)



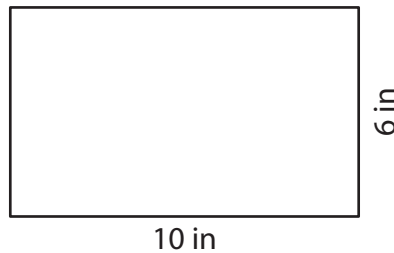
Area = _____

4)



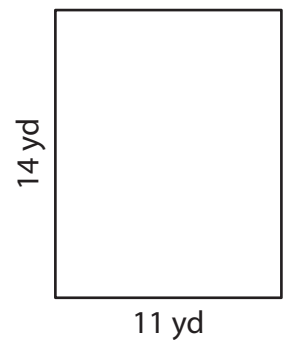
Area = _____

5)



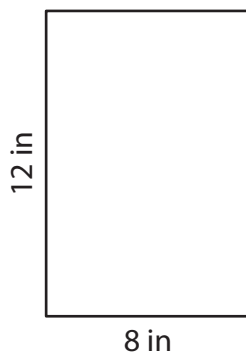
Area = _____

6)



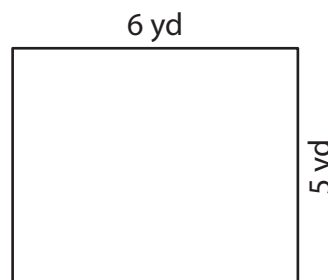
Area = _____

7)



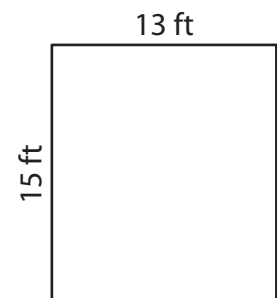
Area = _____

8)



Area = _____

9)



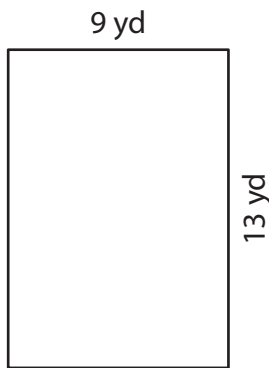
Area = _____

Area of a Rectangle

Answer Key

Find the area of each rectangle.

1)



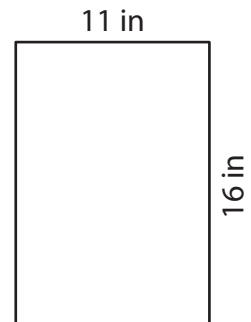
Area = 117 yd²

2)



Area = 36 ft²

3)



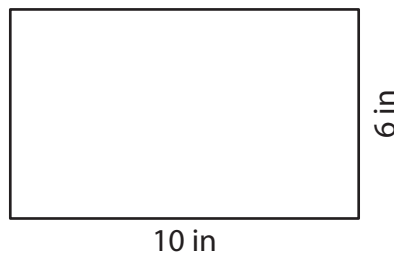
Area = 176 in²

4)



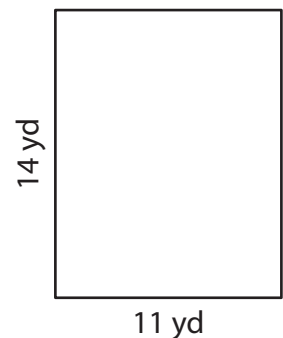
Area = 204 ft²

5)



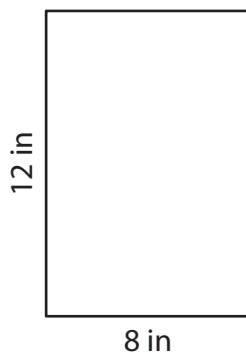
Area = 60 in²

6)



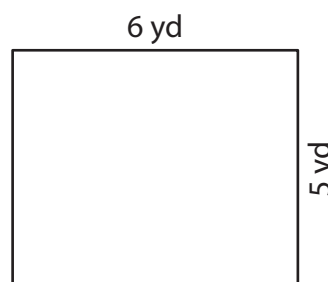
Area = 154 yd²

7)



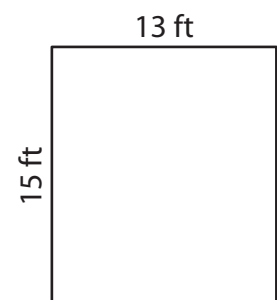
Area = 96 in²

8)



Area = 30 yd²

9)



Area = 195 ft²