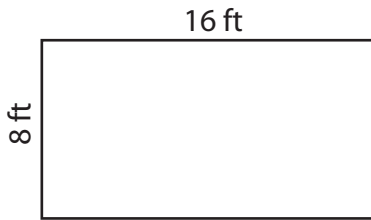


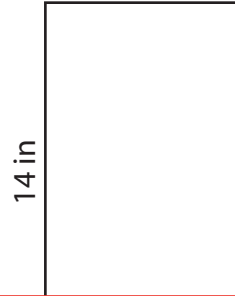
Area of a Rectangle

Find the area of each rectangle.

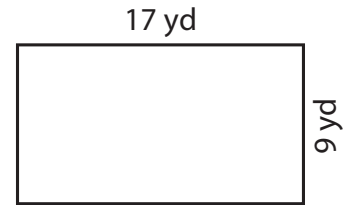
1)



2)



3)



4)

Ar

Preview

Become a member to unlock
unrestricted access to both printable
and online worksheets.



www.tutoringhour.com

Ar

10 in

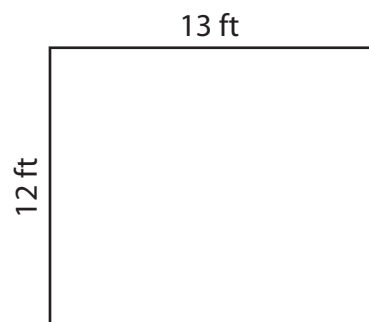
19 ft

7)




Area = _____

8)



Area = _____

9)



Area = _____