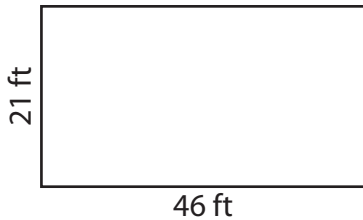


Area of a Rectangle


Find the area of each rectangle.

1)



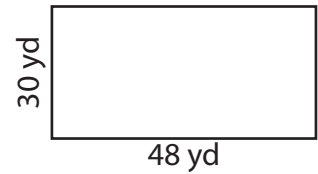
Area = _____

2)



Area = _____

3)



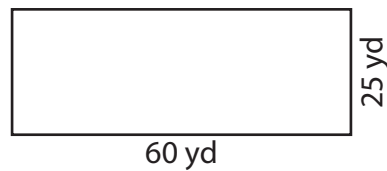
Area = _____

4)



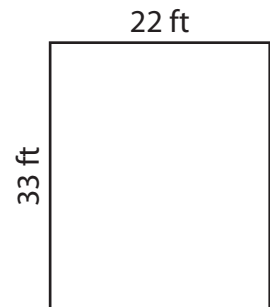
Area = _____

5)



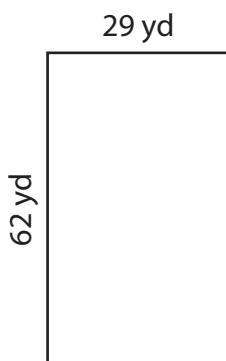
Area = _____

6)



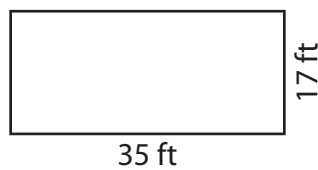
Area = _____

7)



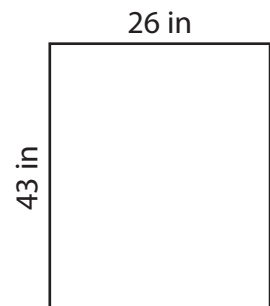
Area = _____

8)



Area = _____

9)



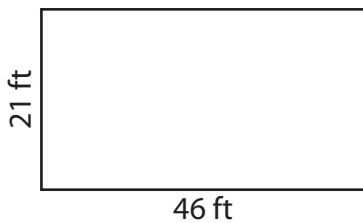
Area = _____

Area of a Rectangle

Answer Key


Find the area of each rectangle.

1)



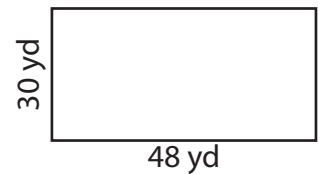
Area = 966 ft²

2)




Area = 936 in²

3)



Area = 1,440 yd²

4)



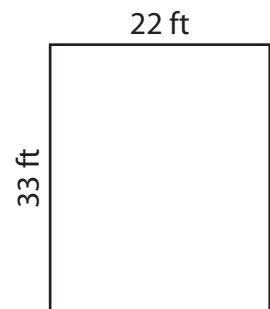
Area = 1,938 in²

5)



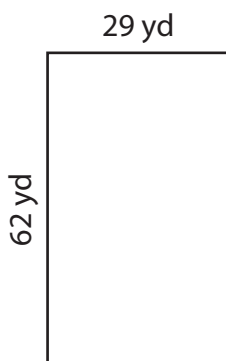
Area = 1,500 yd²

6)



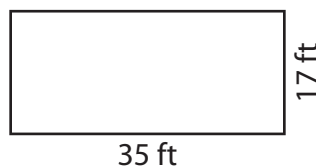
Area = 726 ft²

7)



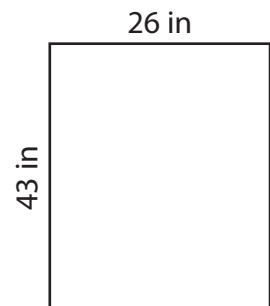
Area = 1,798 yd²

8)



Area = 595 ft²

9)



Area = 1,118 in²