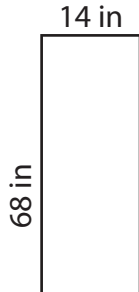


Area of a Rectangle

Find the area of each rectangle.

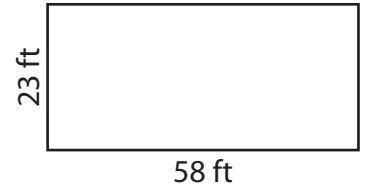
1)



2)



3)



Ar

Preview

4)

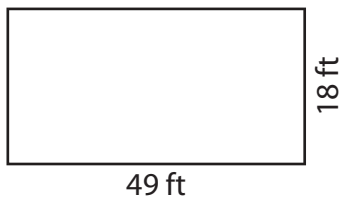
Become a member to unlock
unrestricted access to both printable
and online worksheets.

Ar

www.tutoringhour.com




7)



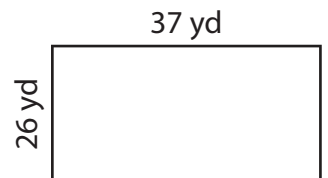
Area = _____

8)



Area = _____

9)



Area = _____